



CANDIDATE
NAME

CENTRE
NUMBER

--	--	--	--	--

CANDIDATE
NUMBER

--	--	--	--



ENVIRONMENTAL MANAGEMENT

8291/01

Paper 1 Lithosphere and Atmosphere

October/November 2011

1 hour 30 minutes

Additional Materials: Answer Booklet/Paper

READ THESE INSTRUCTIONS FIRST

Write your Centre number, candidate number and name on all the work you hand in.
 Write in dark blue or black pen.
 You may use a soft pencil for any diagrams, graphs, tables or rough working.
 Do not use staples, paper clips, highlighters, glue or correction fluid.
 DO **NOT** WRITE IN ANY BARCODES.

Section A

Answer **all** questions.
 Write your answers in the spaces provided on the question paper.

Section B

Answer **one** question from this section.
 Answer the question on the separate answer paper provided.

At the end of the examination,

1. fasten all separate answer paper securely to the question paper;
2. enter the question number from Section B in the grid opposite.

For Examiner's Use	
Section A	
1	
2	
Section B	
Total	

This document consists of **12** printed pages.



Section A

Answer **all** questions in this section.

Write your answers in the spaces provided.

For
Examiner's
Use

- 1 (a) Fig. 1.1 shows tectonic processes operating at a plate boundary.

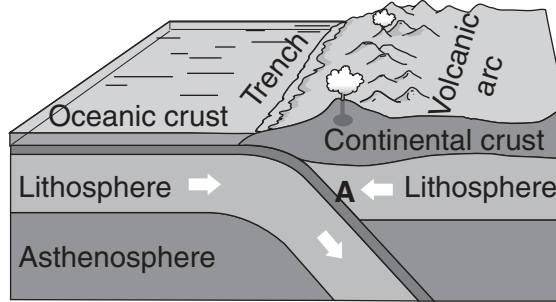


Fig. 1.1

- (i) What is meant by the term *tectonic process*?

.....
.....
.....
..... [2]

- (ii) Name the tectonic process occurring at **A**.

..... [1]

- (iii) Describe the feature labelled trench in Fig. 1.1 and briefly explain how it is formed.

.....
.....
.....
.....
.....
..... [2]

(b) Fig. 1.2 is an example of volcanic activity that frequently occurs at plate boundaries of the type shown in Fig. 1.1.

For
Examiner's
Use



Fig. 1.2

(i) Describe the characteristic features of the volcanic eruption shown in Fig. 1.2.

.....
.....
.....
.....
.....
.....
.....
..... [3]

(ii) Explain why volcanic eruptions are common at this type of plate boundary.

.....
.....
.....
..... [2]

- (ii) In planning for a future eruption, describe other measures that need to be taken into account in addition to monitoring.

*For
Examiner's
Use*

.....

.....

.....

.....

.....

.....

.....

.....

.....

.....

..... [4]

[Total: 20]

2 (a) Fig. 2.1 shows mean monthly temperatures and rainfall for a tropical climate.

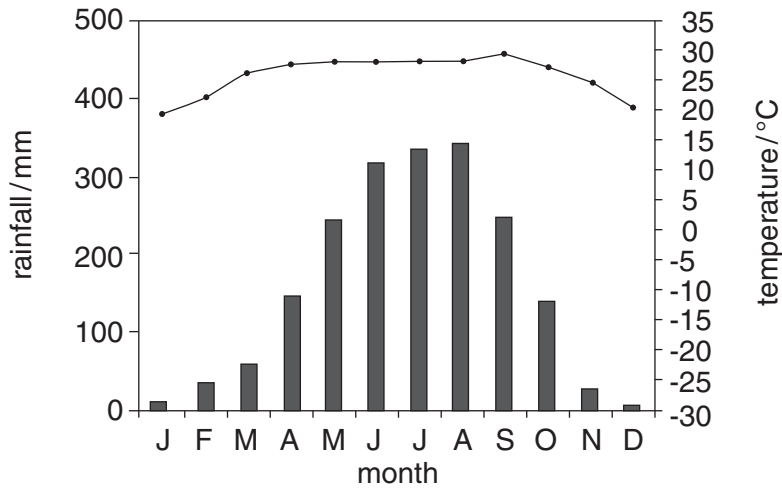


Fig. 2.1

(i) Explain why information for temperature and rainfall in climatic charts such as Fig. 2.1 is averaged over a period of at least 25 years.

.....

.....

.....

..... [2]

(ii) Calculate the annual range of temperature and rainfall shown in Fig. 2.1.

temperature range..... °C

rainfall range.....mm [2]

(iii) Describe the pattern of temperature and rainfall for the climatic area in Fig. 2.1.

.....

.....

.....

.....

.....

.....

.....

.....

..... [4]

(iv) Using data from Fig. 2.1 outline **one** way in which human activity might be influenced by this climate.

*For
Examiner's
Use*

.....

.....

.....

.....

..... [2]

- (b) Fig. 2.2 contains information on the climate of Greece and the fires that devastated areas of the country in the summer of 2009.

For
Examiner's
Use

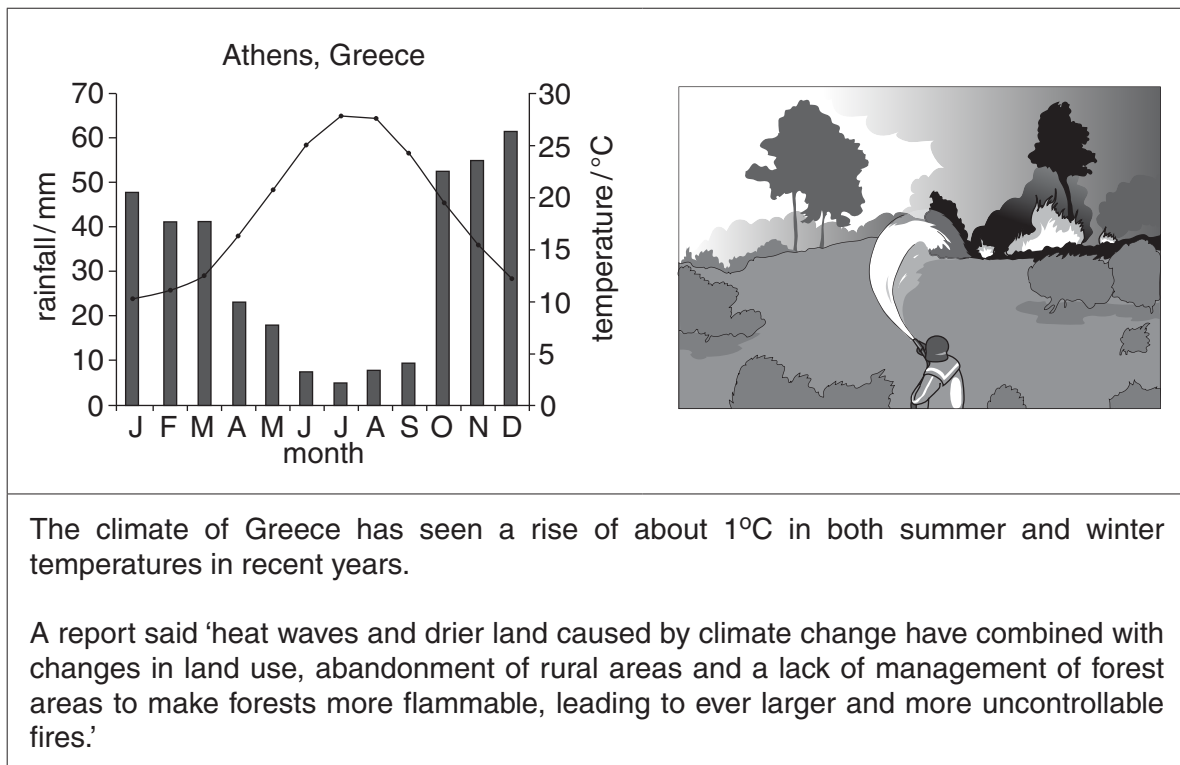


Fig. 2.2

Section B

Answer **one** question from this section.

- 3 (a)** Describe the process by which stratospheric ozone is depleted and briefly describe the effects ozone depletion may have upon the health of people and vegetation. [10]
- (b)** There are signs that the issue of stratospheric ozone depletion is responding to international actions. The issue of global warming, however, remains a major problem.

Describe the international agreements that have been reached in an attempt to solve these key environmental issues. Assess the extent to which MEDCs and LEDCs have been able to comply with agreements in respect of these two issues. [30]

[Total: 40]

- 4 (a) It is argued that the key to making coal-burning power plants more environmentally friendly is to capture the carbon dioxide by equipping them with carbon capture and storage technology.

Fig. 4.1 illustrates a scheme for doing this.

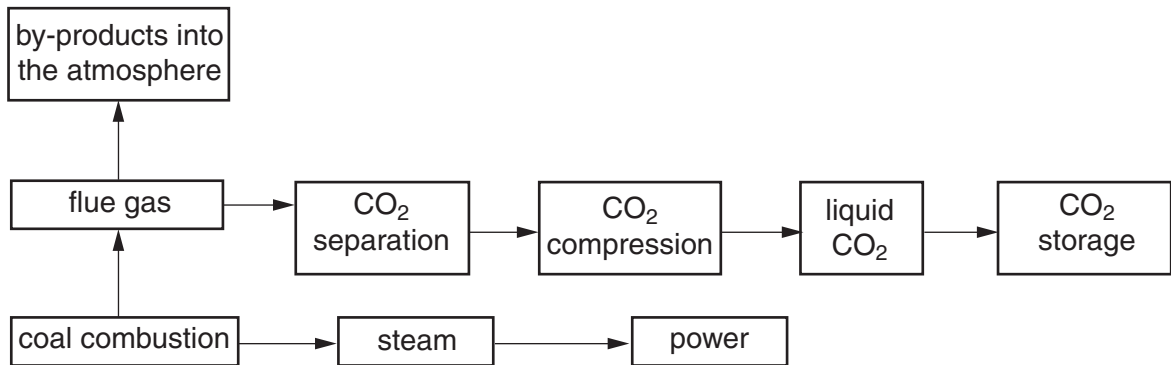


Fig. 4.1

Describe **three** different advantages of the technique shown in Fig. 4.1.

[10]

- (b) Assess the extent to which the advantages of developing and utilising renewable sources of energy outweigh the disadvantages. Your answer should refer to examples from LEDCs and/or MEDCs.

[30]

[Total: 40]

- 5 (a) Explain how vegetation, water infiltration and weathering have contributed to the soil profile in Fig. 5.1. [10]

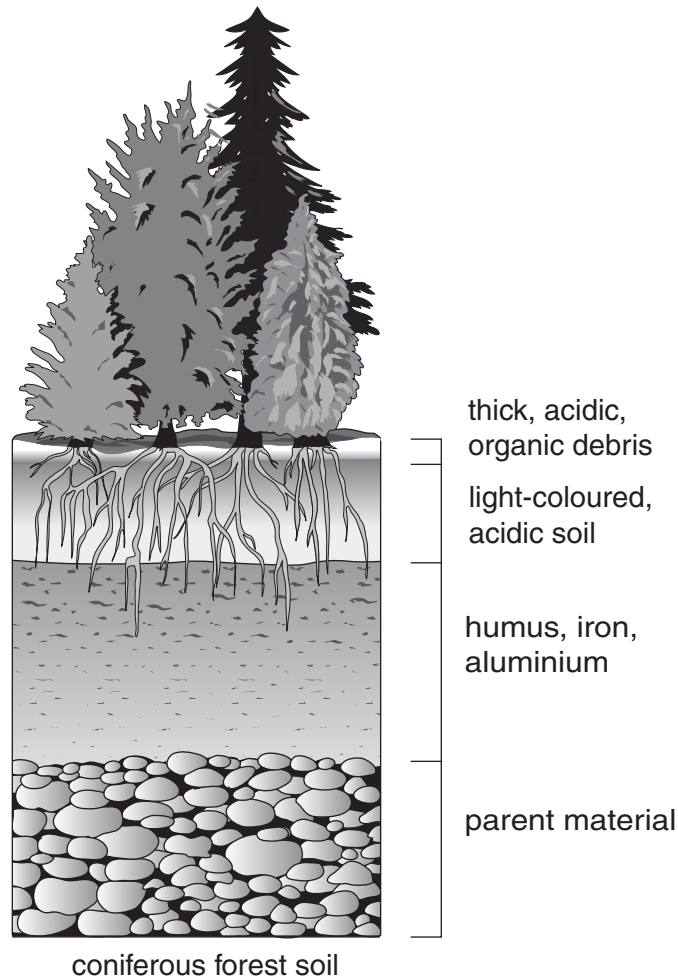


Fig. 5.1

- (b) With reference to examples you have studied, assess the extent to which human activity has caused deterioration in soil quality. Assess **two** methods that could be used to restore degraded soils. [30]

[Total: 40]

Copyright Acknowledgements:

Question 1 Figure 1.3 © Angela Sorrentino; *View of Naples City Panorama with Vesuvius*; iStock Photo 14877741; www.istockphoto.com

Permission to reproduce items where third-party owned material protected by copyright is included has been sought and cleared where possible. Every reasonable effort has been made by the publisher (UCLES) to trace copyright holders, but if any items requiring clearance have unwittingly been included, the publisher will be pleased to make amends at the earliest possible opportunity.

University of Cambridge International Examinations is part of the Cambridge Assessment Group. Cambridge Assessment is the brand name of University of Cambridge Local Examinations Syndicate (UCLES), which is itself a department of the University of Cambridge.