



UNIVERSITY OF CAMBRIDGE INTERNATIONAL EXAMINATIONS
International General Certificate of Secondary Education

CANDIDATE NAME

CENTRE NUMBER

--	--	--	--	--

CANDIDATE NUMBER

--	--	--	--

* 2 5 0 7 8 0 1 1 1 5 *

CO-ORDINATED SCIENCES

0654/21

Paper 2 (Core)

October/November 2010

2 hours

Candidates answer on the Question Paper.

No Additional Materials are required.

READ THESE INSTRUCTIONS FIRST

Write your Centre number, candidate number and name on all the work you hand in.

Write in dark blue or black pen.

You may use a soft pencil for any diagrams, graphs, tables or rough working.

Do not use staples, paper clips, highlighters, glue or correction fluid.

DO NOT WRITE IN ANY BARCODES.

Answer **all** questions.

A copy of the Periodic Table is printed on page 28.

At the end of the examination, fasten all your work securely together.


The number of marks is given in brackets [] at the end of each question or part question.

For Examiner's Use	
1	
2	
3	
4	
5	
6	
7	
8	
9	
10	
Total	

This document consists of **24** printed pages and **4** blank pages.



1 (a) State the word equation for photosynthesis.



[2]

(b) (i) Explain why plants need light for photosynthesis.

.....

 [2]

(ii) State **two** ways in which a plant leaf is adapted to obtain and use light for photosynthesis.

1

 2
 [2]

(c) A student fixed a piece of black paper over a leaf, which was still attached to the plant. He left the plant in the sun for two days.

He then removed the leaf from the plant and tested it for starch, after removing the black paper.

(i) Use the letters given to list the correct sequence of the steps he took.

- A** Add iodine solution to the leaf.
- B** Place the leaf in boiling water.
- C** Dip the leaf into water to soften it.
- D** Place the leaf in hot ethanol.
- E** Spread the leaf on a white tile.

..... [3]

(ii) Fig. 1.1 shows the leaf before and after he did the starch test.

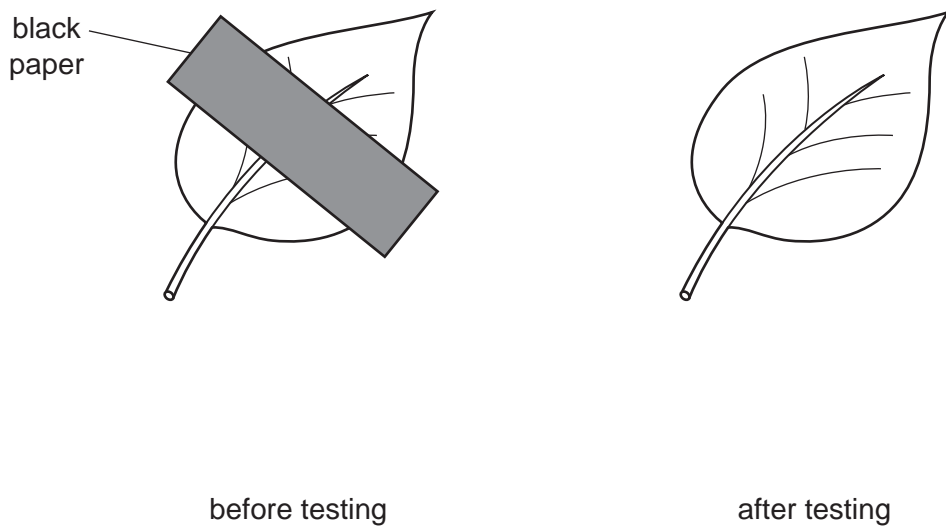


Fig. 1.1

Complete the diagram of the leaf after testing in Fig. 1.1. Do **not** colour the diagram.

Use labels to show which parts would look orange-brown and which parts would look blue-black. [2]

*For
Examiner's
Use*

- 2 Fig. 2.1 shows the apparatus a student used to study the rate of reaction between some powdered metal and dilute hydrochloric acid.

For
Examiner's
Use

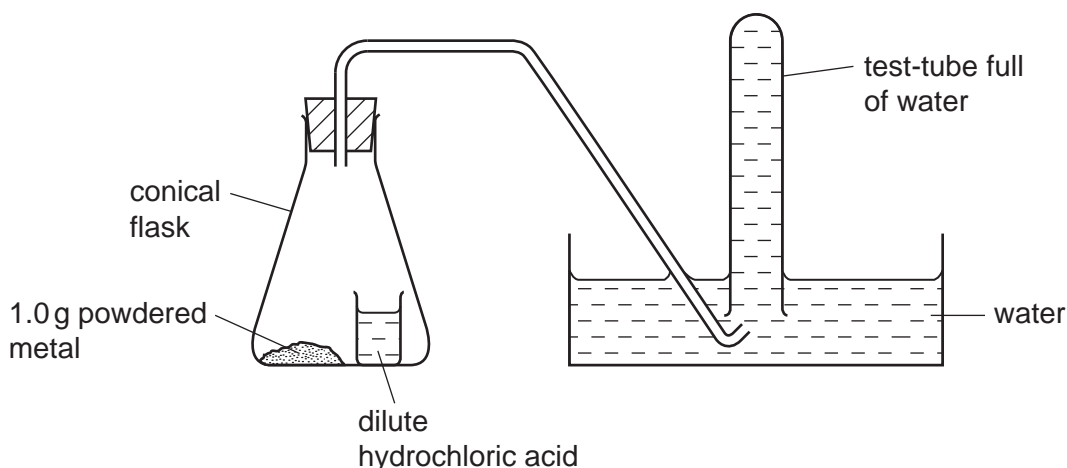


Fig. 2.1

When the student tilted the conical flask, the acid mixed with the powdered metal. If a reaction occurred, any gas which was produced collected in the test-tube, pushing the water out. The student measured the time taken for the test-tube to fill with gas.

The student used the apparatus and method described above to compare the rates of reaction between dilute hydrochloric acid and three powdered metals, **X**, **Y** and **Z**.

The results the student obtained are shown in Table 2.1.

Table 2.1

metal	mass of metal /g	time for gas to fill the test-tube /seconds
X	1.0	150
Y	1.0	45
Z	1.0	no gas was produced

- (a) (i) Name the gas produced when metals **X** and **Y** reacted with dilute hydrochloric acid.

..... [1]

- (ii) Describe the test you would carry out to identify this gas.

.....
 [1]

- (iii) Suggest and explain which metal, **X**, **Y** or **Z**, could have been copper.

metal

explanation

..... [1]

- (iv) The student repeated the experiment with metal **X** but this time she used a single piece of metal weighing 1.0g.

State and explain how the rate of reaction would differ from the experiment in which 1.0g of powdered metal was used.

.....

.....

..... [2]

- (b) In another experiment, the student added powdered zinc to dilute sulfuric acid. When the bubbling stopped, there was still some powdered zinc left at the bottom of the solution.

- (i) Explain why the bubbling eventually stopped even though some zinc powder remained.

.....

..... [1]

- (ii) Name the salt which was left in the solution at the end of the reaction.

..... [1]

(c) In areas where pollution is very low, rain falls through air which contains the gases nitrogen, oxygen and carbon dioxide.

Chemical weathering may occur when rainwater flows over rocks.

(i) Explain why rainwater which falls through unpolluted air has a pH which is slightly less than 7.

.....
.....
..... [2]

(ii) Describe **one** advantage to plants of the chemical weathering of rocks.

.....
.....
..... [2]


- 3 (a) Complete the sentences by choosing words from the list. Each word may be used once, more than once or not at all.

expansion gas heat liquid
 longitudinal movement quickly
 slowly transverse vacuum wave

Sound is a wave. Sound travels through a material by the of its particles.

In a solid the particles are close together, so sound travels more than it does in a gas. Sound cannot travel through a because there are no particles present. [4]

- (b) Fig. 3.1 shows a mobile phone (cell phone). Energy is stored inside the mobile phone in a battery.



mobile phone containing a battery

Fig. 3.1

State the energy change that takes place when the battery is being charged.

..... energy into energy [1]

- (c) Radio waves and visible light are forms of electromagnetic radiation.

(i) Name **one** other form of electromagnetic radiation.

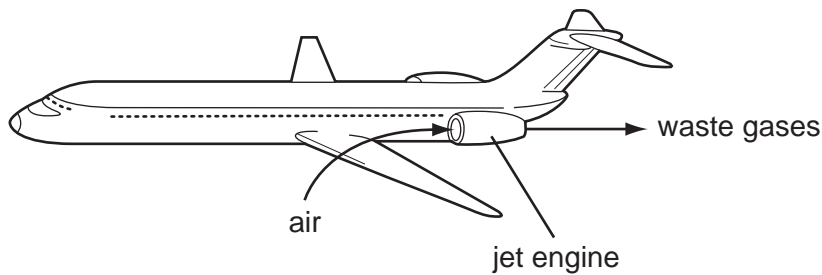
..... [1]

(ii) Give **one** use for the form of electromagnetic radiation you have named in (i).

..... [1]

- 4 In jet engines, hydrocarbon molecules from the jet fuel mix with air and burn. This releases a large amount of energy and produces a mixture of waste gases. These waste gases pass out through the back of the jet engine into the atmosphere.

For
Examiner's
Use



- (a) Fig. 4.1 shows a molecule of octane, which is a typical hydrocarbon molecule in jet fuel.

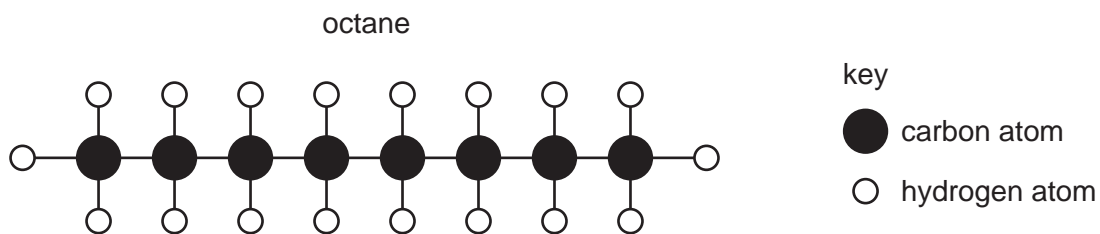



Fig. 4.1

- (i) State the chemical formula of octane. [1]

- (ii) Complete the word equation below for the complete combustion of octane.



[2]

- (iii) Explain why the mixture of gases coming from the rear of the jet engine contains a large amount of nitrogen.

.....

 [2]

- (iv) Explain why the metallic parts of the jet engine become hot when it is working.

.....
 [1]

(b) (i) A carbon atom has a proton (atomic) number 6 and a nucleon (mass) number 12.

State the number of neutrons and electrons in this carbon atom.

number of neutrons

number of electrons [2]

(ii) State the chemical symbol of another element which is in the same **group** in the Periodic Table as carbon.

..... [1]

(c) Table 4.1 shows information about some metallic materials.

Table 4.1

material	strength	density
mild steel	very high	very high
aluminium	low	low
duralumin (an aluminium alloy)	very high	low

(i) Describe briefly how aluminium and an alloy of aluminium differ in composition.

.....
..... [1]

(ii) Duralumin is used in the manufacture of aircraft.

Explain why the properties of this material make it suitable for this purpose.

.....
.....
.....
.....
..... [2]

5 (a) Complete the sentences about the human nervous system, using some of the words in the list.

For
Examiner's
Use

- biceps
 - brain
 - detectors
 - effectors
-
- nerves
 - receptors

Specialised cells in the human nervous system detect external stimuli. These cells are called They convert the stimulus into electrical impulses in, which carry the impulse to the central nervous system.

The central nervous system then sends impulses to parts of the body that respond to the stimulus, such as muscles or glands. These parts are called [3]

(b) When we smell food, the salivary glands respond by secreting saliva.

(i) Saliva contains the enzyme amylase. Describe the function of amylase.

.....
.....
..... [2]

(ii) Explain why it is necessary for most types of food that we eat to be digested.

.....
.....
..... [2]

(iii) Describe how food is moved through the alimentary canal, after we have swallowed it.

.....
.....
..... [2]

BLANK PAGE

Please turn over for Question 6.

6 Fig. 6.1 shows a rock of mass 2 kg that is falling from the top of a cliff into the river below.

For
Examiner's
Use

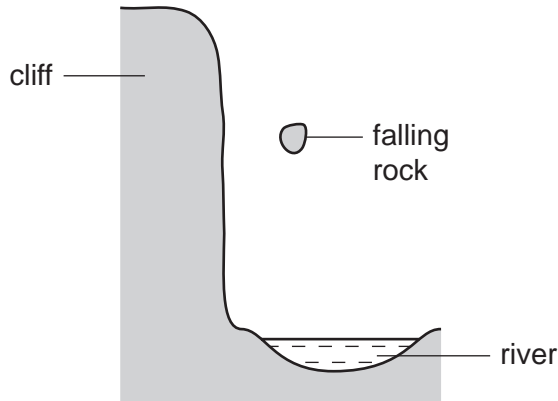


Fig. 6.1

(a) Fig. 6.2 is the speed-time graph for the motion of the rock.

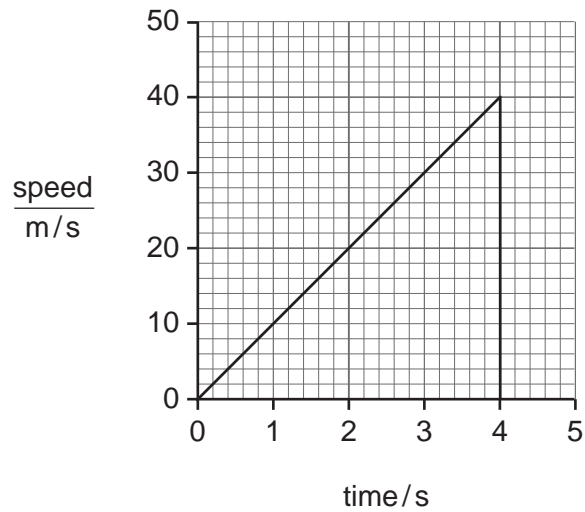


Fig. 6.2

(i) State the maximum speed of the rock. m/s [1]

(ii) Use your answer to (i) to calculate the kinetic energy of the rock as it hits the water.

State the formula that you use and show your working.

formula used

working

..... J [2]

- (b) An observer on the top of the cliff measured the time between when he saw the rock hit the water and when he heard the sound of the splash. This time was 0.25 s. The speed of sound in air is 330 m/s.

Calculate the height of the cliff.

State the formula that you use and show your working.

formula used

working

..... m [2]

- (c) The rock has a mass of 2000 g and a volume of 700 cm³.

Calculate the density of the rock.

State the formula that you use and show your working.

State the units of your answer.

formula used

working

..... [3]

- (d) The rock contains radioactive substances emitting high levels of ionising radiation.

- (i) State how the radioactivity could be detected.

..... [1]

- (ii) Explain why it would be dangerous for a person to handle this rock without proper protection.

..... [1]

7 The gray wolf, *Canis lupus*, is a predator that lives in North America. Fig. 7.1 shows a gray wolf.

For
Examiner's
Use




Fig. 7.1

(a) State **one** feature, visible on Fig. 7.1, which shows that the gray wolf is a mammal.

..... [1]

(b) The binomial for the gray wolf is *Canis lupus*. Another dog-like animal that lives in North America is the coyote, *Canis latrans*.

What do these binomials tell us about the relationship between gray wolf and the coyote?

.....
.....
..... [2]

- (c) In Wisconsin, Canada, the wolves' diet consists mainly of white-tailed deer, beavers, and snowshoe hares.

These all eat plants.

- (i) Construct a food web including all the organisms mentioned above.

For
Examiner's
Use

[3]

- (ii) State what the arrows in your food web represent.

..... [1]

- (iii) With reference to your answers to (i) and (ii), suggest why wolves are rarer than white-tailed deer.

.....
.....
..... [2]

- (d) People used to shoot gray wolves. In 1978, a conservation programme for gray wolves began in Wisconsin and people were no longer allowed to shoot them.

*For
Examiner's
Use*

The main causes of death of wolves are disease, starvation and accidents such as collisions with vehicles.

Fig. 7.2 shows the size of the gray wolf population in Wisconsin between 1986 and 2010. It also shows the predicted wolf population if the conservation programme is successful.

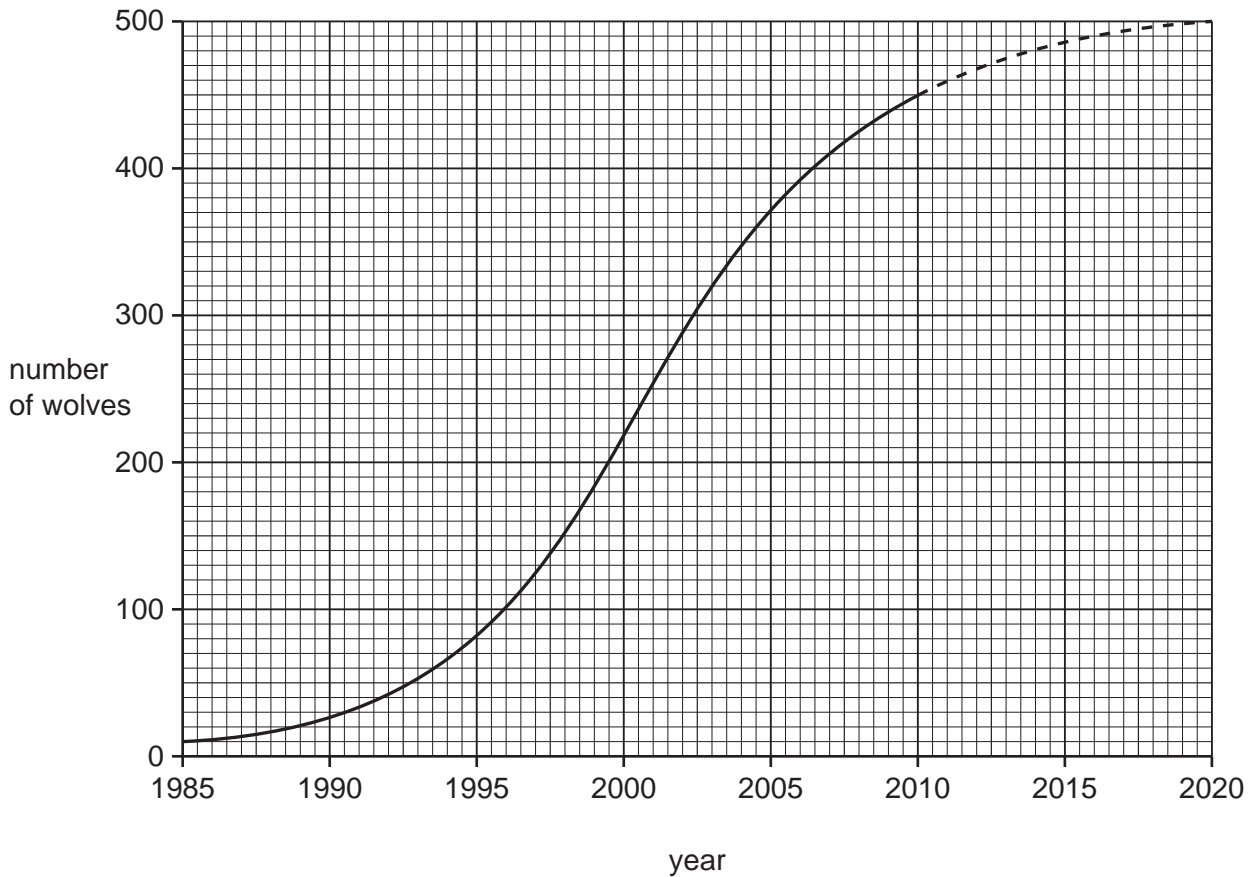


Fig. 7.2

- (i) Suggest why the population of gray wolves in Wisconsin is not expected to increase beyond about 500 individuals, even if they are no longer killed by humans.

.....
.....
..... [2]

- (ii) Some people in Wisconsin are opposed to the wolf conservation programme. Explain why it is important to conserve species such as the gray wolf.

.....
.....
..... [2]

*For
Examiner's
Use*

8 Fig. 8.1 shows an electric heater being used to heat up 0.5 kg of water in a beaker.

For
Examiner's
Use

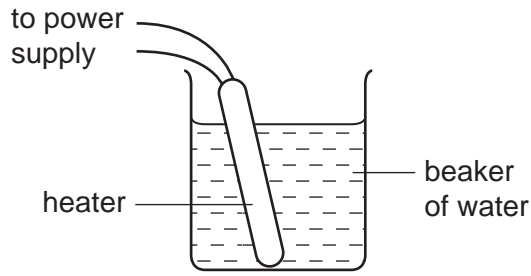


Fig. 8.1

(a) What is the main process by which energy is transferred through the water?

..... [1]

(b) The specific heat capacity of the water is $4200 \text{ J/kg}^\circ\text{C}$.

(i) Explain what is meant by the term *specific heat capacity*.

.....
 [1]

(ii) The electrical energy supplied to the heater in 10 minutes was 70 000 J.

Calculate the power supplied to the heater.

State the formula that you use and show your working.

formula used

working

..... W [2]

(c) The electrical energy for the heater has been generated by burning a fossil fuel in a power station.

*For
Examiner's
Use*

(i) Name **one** suitable fossil fuel. [1]

(ii) Describe **one** problem with the burning of fossil fuels to generate electricity.

.....
..... [1]

(iii) State **one** alternative energy resource to fossil fuels, which could have been used to generate the electricity.

..... [1]

- 9 (a) Copper metal reacts with oxygen gas to form copper oxide.

State why this reaction is an example of oxidation.

.....
 [1]

- (b) Table 9.1 shows information about two different types of copper oxide.

Table 9.1

name	colour	chemical formula
copper(II) oxide	black	CuO
copper(I) oxide	red	Cu ₂ O

- (i) Describe briefly the difference in chemical composition of these two types of copper oxide.

.....

 [2]

- (ii) Copper is a transition metal.

State **one** property, shown in Table 9.1, which is typical of transition metals.

..... [1]

(c) Fig. 9.1 shows apparatus used in the electrolysis of copper chloride solution.

For
Examiner's
Use

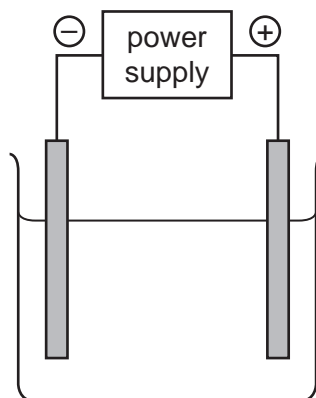


Fig. 9.1

(i) On the diagram, clearly label the **anode** and the **electrolyte**. [2]

(ii) Copper chloride solution is a mixture of copper ions and chloride ions in water.

State briefly **one** difference between a chlorine *atom* and a chloride *ion*.

.....
..... [1]

(iii) When the electrolysis reaction in Fig. 9.1 is occurring, bubbles of gas appear at the surface of the anode.

Describe a safe test and its result to confirm that this gas is chlorine.

.....
.....
..... [2]

(iv) Name the substance which forms at the cathode.

..... [1]

- 10 (a) A student investigated the relationship between the potential difference across a lamp and the current passing through it.

She used the following apparatus:

- ammeter
- connecting wires
- lamp
- power supply
- voltmeter

- (i) Draw a suitable circuit diagram for this investigation.

*For
Examiner's
Use*

[4]

The graph in Fig. 10.1 shows her results.

For
Examiner's
Use

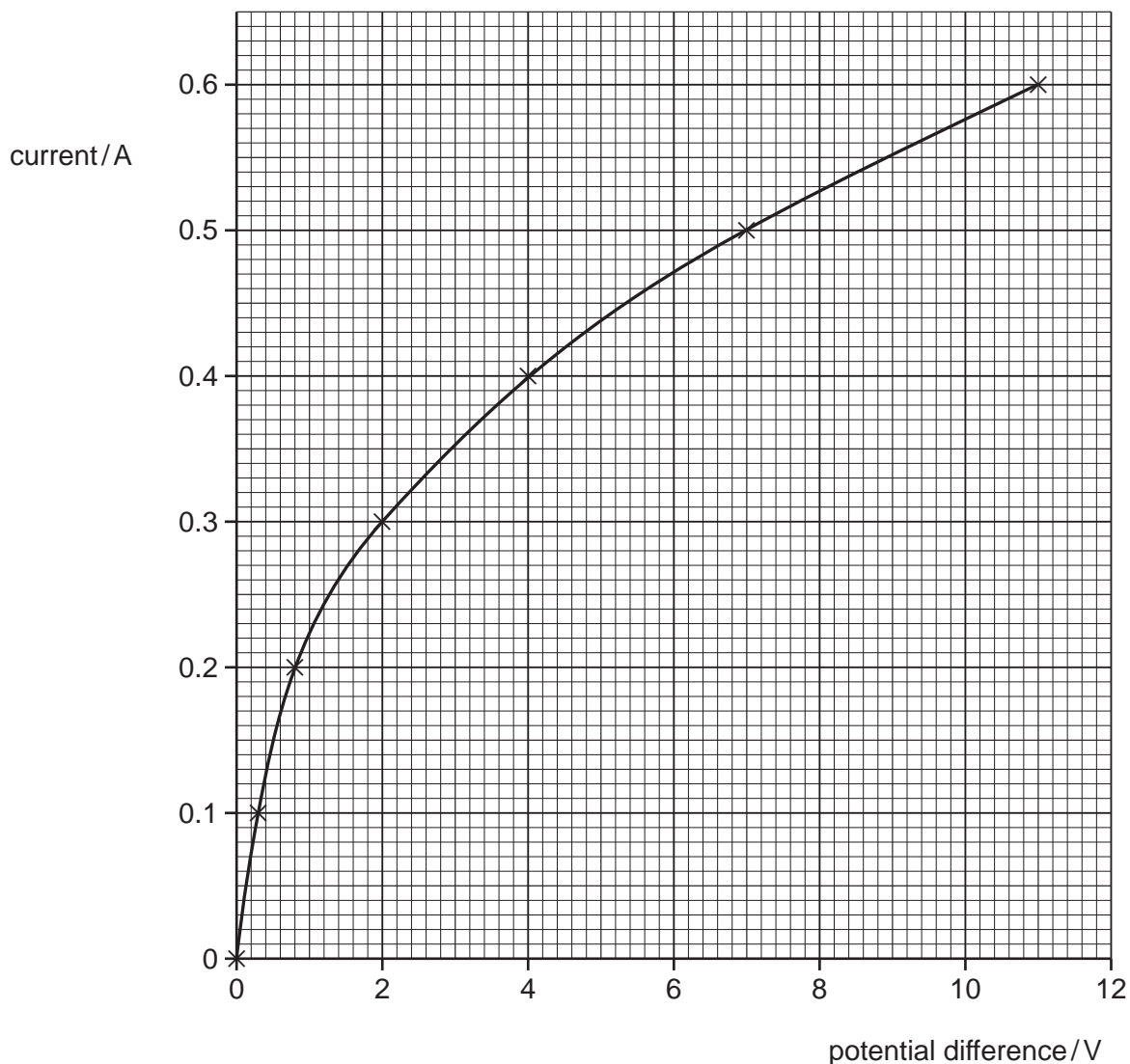


Fig. 10.1

(ii) What is the current when the potential difference is 6 V?

..... A [1]

(iii) Calculate the resistance of the lamp when the potential difference is 6 V.

State the formula that you use and show your working.

formula used

working

..... ohms [2]

(b) A student was given two bar magnets and a bar of soft iron. She carried out the following experiments.

(i) She brought the magnets close together with opposite poles facing.



State what she observed.

.....
..... [1]

(ii) She brought the magnets close together with like poles facing.



State what she observed.

.....
..... [1]

(iii) She brought the soft iron bar towards one of the magnets.



State what she observed.

.....
..... [1]

DATA SHEET
The Periodic Table of the Elements

		Group																																																																																																																																																																																																																																																																																																																																																																																																																																																																																																																																																																																																																																																																																																																																																																																																																																																																																					
		I	II	III	IV	V	VI	VII	VIII	IX	X	0																																																																																																																																																																																																																																																																																																																																																																																																																																																																																																																																																																																																																																																																																																																																																																																																																																																																											
		1 H Hydrogen 1																																																																																																																																																																																																																																																																																																																																																																																																																																																																																																																																																																																																																																																																																																																																																																																																																																																																																					
7	9	3	4	5	6	7	8	9	10	11	12	13	14	15	16	17	18	19	20																																																																																																																																																																																																																																																																																																																																																																																																																																																																																																																																																																																																																																																																																																																																																																																																																																																																				
Li Lithium	Be Beryllium	B Boron	C Carbon	N Nitrogen	O Oxygen	F Fluorine	Ne Neon	Na Sodium	Mg Magnesium	Al Aluminium	Si Silicon	P Phosphorus	S Sulfur	Cl Chlorine	Ar Argon	K Potassium	Ca Calcium	Sc Scandium	Ti Titanium	V Vanadium	Cr Chromium	Mn Manganese	Fe Iron	Co Cobalt	Ni Nickel	Cu Copper	Zn Zinc	Ga Gallium	Ge Germanium	As Arsenic	Se Selenium	Br Bromine	Kr Krypton																																																																																																																																																																																																																																																																																																																																																																																																																																																																																																																																																																																																																																																																																																																																																																																																																																																						
19	37	39	40	41	42	43	44	45	46	47	48	49	50	51	52	53	54	55	56	57	58	59	60	61	62	63	64	65	66	67	68	69	70	71	72	73	74	75	76	77	78	79	80	81	82	83	84	85	86																																																																																																																																																																																																																																																																																																																																																																																																																																																																																																																																																																																																																																																																																																																																																																																																																																						
Rb Rubidium	Sr Strontium	Y Yttrium	Zr Zirconium	Nb Niobium	Mo Molybdenum	Tc Technetium	Ru Ruthenium	Rh Rhodium	Pd Palladium	Ag Silver	Cd Cadmium	In Indium	Sn Tin	Sb Antimony	Te Tellurium	I Iodine	Xe Xenon	Cs Caesium	Ba Barium	La Lanthanum	Ce Cerium	Pr Praseodymium	Nd Neodymium	Pm Promethium	Sm Samarium	Eu Europium	Gd Gadolinium	Tb Terbium	Dy Dysprosium	Ho Holmium	Er Erbium	Tm Thulium	Yb Ytterbium	Lu Lutetium	Fr Francium	Ra Radium	Ac Actinium	Th Thorium	Pa Protactinium	U Uranium	Np Neptunium	Pu Plutonium	Am Americium	Cm Curium	Bk Berkelium	Cf Californium	Fm Fermium	Md Mendelevium	No Nobelium	Lr Lawrencium																																																																																																																																																																																																																																																																																																																																																																																																																																																																																																																																																																																																																																																																																																																																																																																																																																					
55	87	89	91	93	96	101	106	112	115	119	122	127	131	133	137	140	141	144	146	151	152	157	162	163	164	165	167	168	169	170	171	173	175	177	179	181	182	183	184	185	186	187	188	189	190	191	192	193	194	195	196	197	198	199	200	201	202	203	204	205	206	207	208	209	210	211	212	213	214	215	216	217	218	219	220	221	222	223	224	225	226	227	228	229	230	231	232	233	234	235	236	237	238	239	240	241	242	243	244	245	246	247	248	249	250	251	252	253	254	255	256	257	258	259	260	261	262	263	264	265	266	267	268	269	270	271	272	273	274	275	276	277	278	279	280	281	282	283	284	285	286	287	288	289	290	291	292	293	294	295	296	297	298	299	300	301	302	303	304	305	306	307	308	309	310	311	312	313	314	315	316	317	318	319	320	321	322	323	324	325	326	327	328	329	330	331	332	333	334	335	336	337	338	339	340	341	342	343	344	345	346	347	348	349	350	351	352	353	354	355	356	357	358	359	360	361	362	363	364	365	366	367	368	369	370	371	372	373	374	375	376	377	378	379	380	381	382	383	384	385	386	387	388	389	390	391	392	393	394	395	396	397	398	399	400	401	402	403	404	405	406	407	408	409	410	411	412	413	414	415	416	417	418	419	420	421	422	423	424	425	426	427	428	429	430	431	432	433	434	435	436	437	438	439	440	441	442	443	444	445	446	447	448	449	450	451	452	453	454	455	456	457	458	459	460	461	462	463	464	465	466	467	468	469	470	471	472	473	474	475	476	477	478	479	480	481	482	483	484	485	486	487	488	489	490	491	492	493	494	495	496	497	498	499	500	501	502	503	504	505	506	507	508	509	510	511	512	513	514	515	516	517	518	519	520	521	522	523	524	525	526	527	528	529	530	531	532	533	534	535	536	537	538	539	540	541	542	543	544	545	546	547	548	549	550	551	552	553	554	555	556	557	558	559	560	561	562	563	564	565	566	567	568	569	570	571	572	573	574	575	576	577	578	579	580	581	582	583	584	585	586	587	588	589	590	591	592	593	594	595	596	597	598	599	600	601	602	603	604	605	606	607	608	609	610	611	612	613	614	615	616	617	618	619	620	621	622	623	624	625	626	627	628	629	630	631	632	633	634	635	636	637	638	639	640	641	642	643	644	645	646	647	648	649	650	651	652	653	654	655	656	657	658	659	660	661	662	663	664	665	666	667	668	669	670	671	672	673	674	675	676	677	678	679	680	681	682	683	684	685	686	687	688	689	690	691	692	693	694	695	696	697	698	699	700	701	702	703	704	705	706	707	708	709	710	711	712	713	714	715	716	717	718	719	720	721	722	723	724	725	726	727	728	729	730	731	732	733	734	735	736	737	738	739	740	741	742	743	744	745	746	747	748	749	750	751	752	753	754	755	756	757	758	759	760	761	762	763	764	765	766	767	768	769	770	771	772	773	774	775	776	777	778	779	780	781	782	783	784	785	786	787	788	789	790	791	792	793	794	795	796	797	798	799	800	801	802	803	804	805	806	807	808	809	810	811	812	813	814	815	816	817	818	819	820	821	822	823	824	825	826	827	828	829	830	831	832	833	834	835	836	837	838	839	840	841	842	843	844	845	846	847	848	849	850	851	852	853	854	855	856	857	858	859	860	861	862	863	864	865	866	867	868	869	870	871	872	873	874	875	876	877	878	879	880	881	882	883	884	885	886	887	888	889	890	891	892	893	894	895	896	897	898	899	900	901	902	903	904	905	906	907	908	909	910	911	912	913	914	915	916	917	918	919	920	921	922	923	924	925	926	927	928	929	930	931	932	933	934	935	936	937	938	939	940	941	942	943	944	945	946	947	948	949	950	951	952	953	954	955	956	957	958	959	960	961	962	963	964	965	966	967	968	969	970	971	972	973	974	975	976	977	978	979	980	981	982	983	984	985	986	987	988	989	990	991	992	993	994	995	996	997	998	999	1000

*58-71 Lanthanoid series
†90-103 Actinoid series

Key

a	X	=	relative atomic mass
b	X	=	atomic symbol
c	X	=	proton (atomic) number

The volume of one mole of any gas is 24 dm³ at room temperature and pressure (r.t.p.).

Permission to reproduce items where third-party owned material protected by copyright is included has been sought and cleared where possible. Every reasonable effort has been made by the publisher (UCLES) to trace copyright holders, but if any items requiring clearance have unwittingly been included, the publisher will be pleased to make amends at the earliest possible opportunity.

University of Cambridge International Examinations is part of the Cambridge Assessment Group. Cambridge Assessment is the brand name of University of Cambridge Local Examinations Syndicate (UCLES), which is itself a department of the University of Cambridge.