



UNIVERSITY OF CAMBRIDGE INTERNATIONAL EXAMINATIONS  
General Certificate of Education Ordinary Level

CANDIDATE  
NAME

CENTRE  
NUMBER

--	--	--	--	--

CANDIDATE  
NUMBER

--	--	--	--

\* 8 0 5 8 5 9 2 1 3 \*

**CHEMISTRY**

Paper 2 Theory

**5070/02**

**May/June 2007**

**1 hour 30 minutes**

Candidates answer on the Question Paper.

Additional Materials: Answer Booklet/Paper

**READ THESE INSTRUCTIONS FIRST**

Write your Centre number, candidate number and name on all the work you hand in.

Write in dark blue or black pen.

Do not use staples, paper clips, highlighters, glue or correction fluid.

DO **NOT** WRITE ON ANY BARCODES.

**Section A**

Answer **all** questions.

Write your answers in the spaces provided on the Question Paper.

**Section B**

Answer any **three** questions.

Write your answers on any lined pages and/or separate answer paper.

A copy of the Periodic Table is printed on page 16.

At the end of the examination, fasten all your work securely together.

The number of marks is given in brackets [ ] at the end of each question or part question.

For Examiner's Use	
Section A	
B9	
B10	
B11	
B12	
Total	

This document consists of **16** printed pages.



## Section A

Answer **all** the questions in this section in the spaces provided.

The total mark for this section is 45.

**A1** Choose from the following oxides to answer the questions below.

**aluminium oxide**  
**calcium oxide**  
**carbon monoxide**  
**copper(II) oxide**  
**sulphur dioxide**  
**sulphur trioxide**  
**vanadium(V) oxide**

Each oxide can be used once, more than once or not at all.

Name an oxide which

**(a)** is used as a catalyst in the Contact process,

.....[1]

**(b)** is formed during the incomplete combustion of propane,

.....[1]

**(c)** reacts with dilute sulphuric acid to give a blue solution,

.....[1]

**(d)** reacts with water to give sulphurous acid,

.....[1]

**(e)** when heated in a Blast Furnace with sand makes slag.

.....[1]

[Total: 5]

**A2** A fertiliser contains three compounds:

- ammonium sulphate,  $(\text{NH}_4)_2\text{SO}_4$ ,
- iron(II) sulphate,  $\text{FeSO}_4$ ,
- sand,  $\text{SiO}_2$ .

**(a)** Calculate the percentage by mass of nitrogen in ammonium sulphate.

..... % [2]

**(b)** Aqueous iron(II) ions and aqueous iron(III) ions can be distinguished by reaction with aqueous sodium hydroxide. Describe what you would observe as a result of each reaction.

observation with aqueous iron(II) ions .....

.....

observation with aqueous iron(III) ions .....

.....[2]

**(c)** Aqueous iron(II) ions can be oxidised by reaction with acidified potassium manganate(VII),  $\text{KMnO}_4$ . The colour change during the reaction shows that iron(II) ions act as a reducing agent.

**(i)** Describe the colour change during the reaction.

.....[1]

**(ii)** In terms of oxidation numbers, explain the meaning of the term *reducing agent*.

.....

.....[1]

- (d) The mass of iron(II) ions in a sample of fertiliser can be determined by the reaction between iron(II) ions and acidified potassium manganate(VII),  $\text{KMnO}_4$ .

A student analysed a sample of the fertiliser. He dissolved the sample in  $25.0\text{ cm}^3$  of dilute sulphuric acid and titrated the solution formed with  $0.0200\text{ mol/dm}^3$  potassium manganate(VII).

The student used  $22.5\text{ cm}^3$  of potassium manganate(VII) to reach the end-point.

- (i) Calculate the number of moles of potassium manganate(VII) used in the titration.

..... moles [1]

- (ii) One mole of potassium manganate(VII) reacts with five moles of iron(II) ions. Calculate the mass, in grams, of iron(II) ions in the sample analysed.

..... g [2]

[Total: 9]

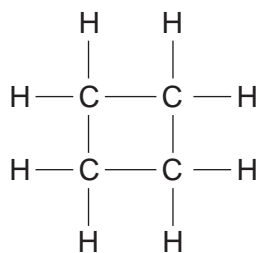
- A3** Complete the table below to show the number of subatomic particles in each of the two ions.

ion	number of protons	number of neutrons	number of electrons
$^{40}\text{Ca}^{2+}$			
$^{37}\text{Cl}^-$			

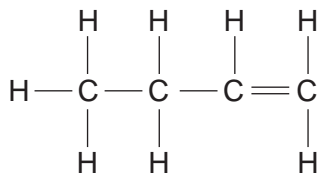
[2]

[Total: 2]

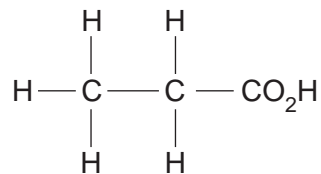
**A4** Structures of six organic compounds are shown.



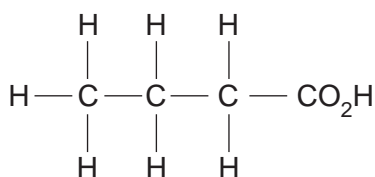
compound **A**



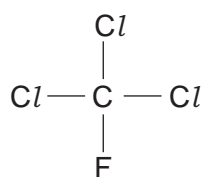
compound **B**



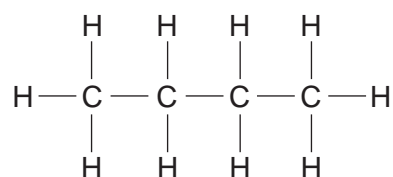
compound **C**



compound **D**



compound **E**



compound **F**

(a) Which **two** compounds have the same molecular formula?

..... and .....[1]

(b) Which compound is butanoic acid?

.....[1]

(c) Which compound contributes to ozone depletion in the upper atmosphere?

.....[1]

(d) Name compound **B**.

.....[1]

[Total: 4]

**A5 (a)** Concentrated aqueous sodium chloride contains  $\text{H}^+$  and  $\text{OH}^-$  ions.

- (i)** Give the formulae of **two** other ions present in concentrated aqueous sodium chloride.

.....[1]

- (ii)** Concentrated aqueous sodium chloride is electrolysed using inert graphite electrodes.

Name the product formed at each electrode.

product at anode .....

product at cathode .....[2]

- (b)** Impure copper can be purified by electrolysis.

Draw a labelled diagram of the electrolytic cell that can be used to purify copper.

[3]

- (c)** Aluminium is extracted commercially from an aluminium ore by electrolysis.

- (i)** Name an ore containing aluminium.

.....[1]

- (ii)** Name the element used as the anode in this process.

.....[1]

[Total: 8]

**A6** Chlorine is in Group VII of the Periodic Table.

Chlorine reacts with aqueous potassium iodide to form potassium chloride and iodine.

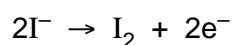
**(a)** Describe what you would see when chlorine is added to aqueous potassium iodide.

.....  
 .....[1]

**(b)** Write the equation for the reaction between chlorine and potassium iodide.

.....[1]

**(c)** When chlorine reacts with potassium iodide, iodine molecules are formed.



Explain why the formation of an iodine molecule from iodide ions is an example of oxidation.

.....  
 .....[1]

**(d)** Astatine is another element in Group VII. It is highly radioactive and so is very difficult to study.

**(i)** Predict, with reasons, whether astatine will react with aqueous potassium iodide.

.....  
 .....[1]

**(ii)** Write the equation for the reaction between astatine and sodium.

.....  
 .....[1]

[Total: 5]

**A7** The carbonates of many metallic elements decompose when heated.

- (a) Name the gas produced during the decomposition of a metal carbonate and describe a chemical test for this gas.

gas produced .....

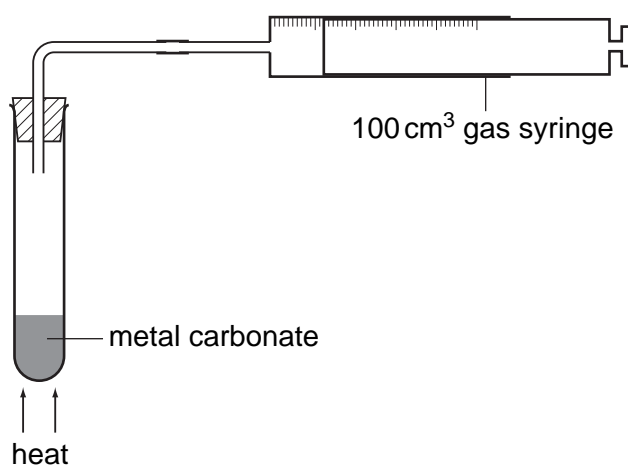
chemical test .....

.....[2]

- (b) Calcium oxide is manufactured by the decomposition of calcium carbonate. Write the equation for this decomposition.

.....[1]

- (c) A student investigates the decomposition of five different metal carbonates. The diagram shows the apparatus the student uses.



The student heats a 0.010 mol sample of each carbonate using the blue flame of the same Bunsen burner. She measures the time it takes for 100 cm<sup>3</sup> of gas to be collected in the gas syringe.

The table shows her results.

carbonate	time taken to collect 100 cm <sup>3</sup> of gas /s
metal <b>U</b> carbonate	25
metal <b>V</b> carbonate	100
metal <b>X</b> carbonate	300
metal <b>Y</b> carbonate	no gas produced after 1000 seconds
metal <b>Z</b> carbonate	50

The student used calcium carbonate, copper(II) carbonate, magnesium carbonate, sodium carbonate and zinc carbonate.



Complete the table to show the identity of each metal **U**, **V**, **X**, **Y** and **Z**.

metal	name of metal
<b>U</b>	.....
<b>V</b>	.....
<b>X</b>	.....
<b>Y</b>	.....
<b>Z</b>	.....

Explain how you used the student's results to identify each metal.

.....

.....

.....

[3]

- (d) The nitrates of metallic elements also decompose when heated.  
Calcium nitrate decomposes to form calcium oxide, nitrogen dioxide and oxygen.



A 0.010 mol sample of calcium nitrate is heated. Calculate the number of moles of gas produced when this sample is completely decomposed.

..... moles [1]

[Total: 7]

**A8** Between the 13<sup>th</sup> and the 19<sup>th</sup> Century artists used a green pigment called verdigris. It was made by hanging copper foil over boiling vinegar.

- (a) Vinegar is an aqueous solution of ethanoic acid.  
Draw the structure of ethanoic acid.

[1]

- (b) During the preparation of verdigris, copper atoms, oxygen molecules and hydrogen ions combine to form copper(II) ions and water.

Write the ionic equation for this reaction.

.....[2]

- (c) Verdigris has the formula  $[\text{Cu}(\text{CH}_3\text{CO}_2)_2]_2 \cdot \text{Cu}(\text{OH})_2 \cdot x\text{H}_2\text{O}$ .  
It has a relative formula mass of 552.  
Calculate the value of **x** in the formula.

**x** is ..... [2]

[Total: 5]

## Section B

Answer **three** questions from this section.

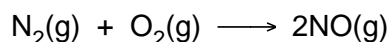
The total mark for this section is 30.

**B9** This question is about the chemistry of the elements in Period 3 of the Periodic Table.

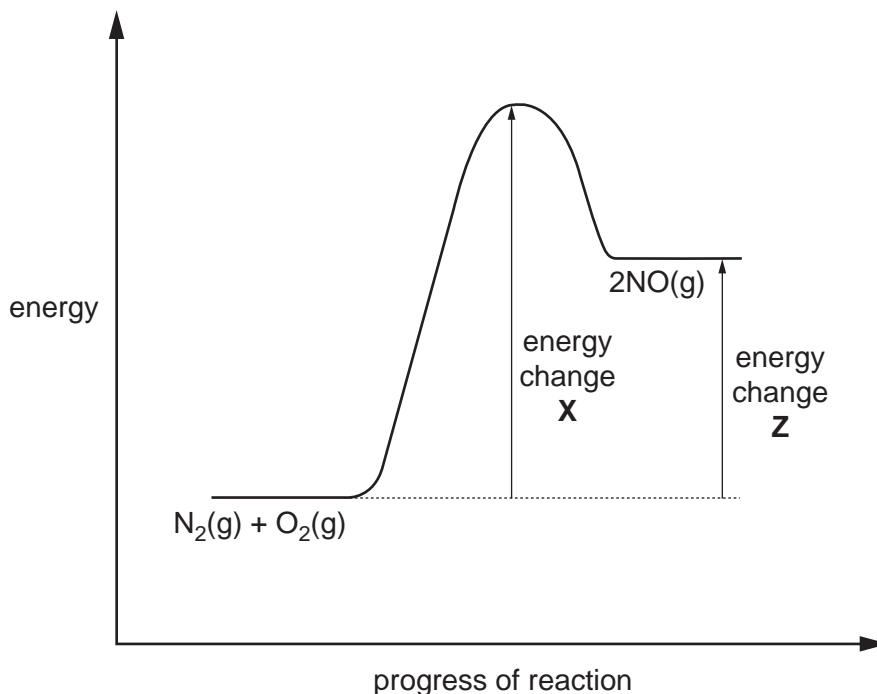
- (a) Compare the reactions of sodium and of magnesium with cold water. In each case identify the products formed. [3]
- (b) Draw electronic structures, including the charges, of the ions present in sodium oxide. Hence deduce the formula for sodium oxide. [2]
- (c) Write an equation for the formation of aluminium oxide from its elements. [1]
- (d) Pure sand is silicon(IV) oxide. It has a giant molecular structure similar to that of diamond. Suggest **two** physical properties of silicon(IV) oxide. [2]
- (e) Chlorine(VII) oxide,  $\text{Cl}_2\text{O}_7$ , has a simple molecular structure. Suggest one **physical** and one **chemical** property of  $\text{Cl}_2\text{O}_7$ . [2]

[Total: 10]

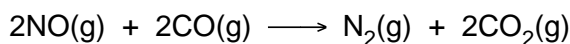
**B10** Oxides of nitrogen are atmospheric pollutants. Nitrogen monoxide, NO, is formed in a combustion engine when nitrogen and oxygen react together.



The diagram shows the energy profile for this reaction.



- (a) Identify the energy changes **X** and **Z**. [2]
- (b) The reaction between nitrogen and oxygen is endothermic.
- (i) Explain how you can tell from the diagram that the reaction is endothermic. [1]
- (ii) Explain, using ideas about bond breaking and bond making, why the overall reaction is endothermic. [3]
- (c) The exhaust system of a motor car is fitted with a catalytic converter. When nitrogen monoxide passes through the converter it reacts with carbon monoxide.



The catalyst increases the rate of this reaction.

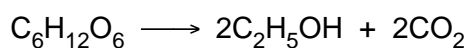
- (i) Explain how the catalyst in the converter increases the rate of this reaction. [1]
- (ii) During the course of a journey  $2.4 \text{ dm}^3$  of nitrogen monoxide was produced by the engine. Calculate the volume of nitrogen gas produced if all the nitrogen monoxide reacted in the converter. [1]
- (iii) In reality, only  $1.0 \text{ dm}^3$  of nitrogen was produced after the gases had passed over the catalytic converter. Calculate the percentage of nitrogen monoxide that had reacted. [2]

[Total: 10]

**B11** The table shows the formula of the first three members of the alcohol homologous series.

alcohol	formula
methanol	CH <sub>3</sub> OH
ethanol	C <sub>2</sub> H <sub>5</sub> OH
propanol	C <sub>3</sub> H <sub>7</sub> OH

- (a) Deduce the general formula for the alcohol homologous series. [1]
- (b) Name the products of the complete combustion of methanol. [1]
- (c) Ethanol can be manufactured from either ethene or glucose.
- (i) Write an equation for the production of ethanol from ethene and state the conditions under which the reaction takes place. [2]
- (ii) The fermentation of glucose can be represented by the following equation.

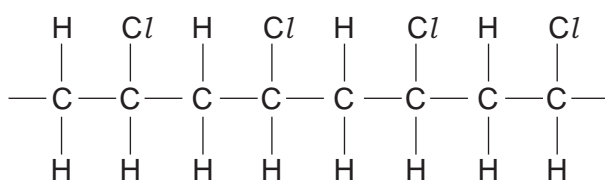


Calculate the maximum mass of ethanol that could be made from 36 tonnes of glucose. [3]

- (iii) Explain why ethanol made from ethene is a non-renewable fuel but that made from glucose is a renewable fuel. [2]
- (d) Propanol reacts in a similar way to ethanol.  
Name the organic product of the reaction between propanol and warm acidified potassium dichromate(VI). [1]

[Total: 10]

**B12** The macromolecule below is an addition polymer.



polymer **X**

- (a) Draw the structure of the monomer from which polymer **X** is formed. [1]
- (b) The atoms in polymer **X** are covalently bonded.
- (i) Explain what is meant by a covalent bond. [1]
- (ii) Polymer **X** is used as an insulating cover for electrical wires. Explain why polymer **X** does not conduct electricity. [1]
- (c) Polymer **X** is non-biodegradable.
- (i) Describe one pollution problem that this causes. [1]
- (ii) Polymer **X** can be disposed of by burning at high temperature. This produces waste gases, some of which are toxic such as hydrogen chloride. The hydrogen chloride can be removed by reacting the waste gases with moist calcium carbonate powder. Name the three products of this reaction. [3]
- (d) Ethene can be used to make poly(ethene).
- (i) Draw a 'dot-and-cross' diagram for an ethene molecule,  $\text{C}_2\text{H}_4$ . You must draw all of the electrons. [2]
- (ii) What is the maximum mass of poly(ethene) that can be made from 28 tonnes of ethene? [1]

[Total: 10]

A series of horizontal dotted lines for writing, spanning the width of the page.

**DATA SHEET**  
**The Periodic Table of the Elements**

		Group										
I	II	III	IV	V	VI	VII	O					
		1 <b>H</b> Hydrogen 1										4 <b>He</b> Helium 2
7 <b>Li</b> Lithium 3	9 <b>Be</b> Beryllium 4		11 <b>B</b> Boron 5	12 <b>C</b> Carbon 6	14 <b>N</b> Nitrogen 7	16 <b>O</b> Oxygen 8	19 <b>F</b> Fluorine 9	20 <b>Ne</b> Neon 10				
23 <b>Na</b> Sodium 11	24 <b>Mg</b> Magnesium 12		27 <b>Al</b> Aluminium 13	28 <b>Si</b> Silicon 14	31 <b>P</b> Phosphorus 15	32 <b>S</b> Sulphur 16	35.5 <b>Cl</b> Chlorine 17	40 <b>Ar</b> Argon 18				
39 <b>K</b> Potassium 19	40 <b>Ca</b> Calcium 20		70 <b>Ga</b> Gallium 31	73 <b>Ge</b> Germanium 32	75 <b>As</b> Arsenic 33	79 <b>Se</b> Selenium 34	80 <b>Br</b> Bromine 35	84 <b>Kr</b> Krypton 36				
85 <b>Rb</b> Rubidium 37	88 <b>Sr</b> Strontium 38		112 <b>In</b> Indium 49	119 <b>Sn</b> Tin 50	122 <b>Sb</b> Antimony 51	128 <b>Te</b> Tellurium 52	127 <b>I</b> Iodine 53	131 <b>Xe</b> Xenon 54				
133 <b>Cs</b> Caesium 55	137 <b>Ba</b> Barium 56		204 <b>Tl</b> Thallium 81	207 <b>Pb</b> Lead 82	209 <b>Bi</b> Bismuth 83	210 <b>Po</b> Polonium 84	210 <b>At</b> Astatine 85	210 <b>Rn</b> Radon 86				
226 <b>Fr</b> Francium 87	226 <b>Ra</b> Radium 88											
			65 <b>Zn</b> Zinc 30	64 <b>Cu</b> Copper 29	59 <b>Ni</b> Nickel 28	58 <b>Co</b> Cobalt 27	56 <b>Fe</b> Iron 26	55 <b>Mn</b> Manganese 25	54 <b>Cr</b> Chromium 24	51 <b>V</b> Vanadium 23	48 <b>Ti</b> Titanium 22	45 <b>Sc</b> Scandium 21
			112 <b>Cd</b> Cadmium 48	108 <b>Ag</b> Silver 47	106 <b>Pd</b> Palladium 46	103 <b>Rh</b> Rhodium 45	101 <b>Ru</b> Ruthenium 44	98 <b>Os</b> Osmium 76	96 <b>Mo</b> Molybdenum 42	93 <b>Nb</b> Niobium 41	91 <b>Zr</b> Zirconium 40	89 <b>Y</b> Yttrium 39
			201 <b>Hg</b> Mercury 80	197 <b>Au</b> Gold 79	195 <b>Pt</b> Platinum 78	192 <b>Ir</b> Iridium 77	190 <b>Os</b> Osmium 76	186 <b>Re</b> Rhenium 75	184 <b>W</b> Tungsten 74	181 <b>Ta</b> Tantalum 73	178 <b>Hf</b> Hafnium 72	139 <b>La</b> Lanthanum 57
												227 <b>Ac</b> Actinium 89

58-71 Lanthanoid series  
90-103 Actinoid series

<b>a</b>	<b>X</b>
<b>b</b>	<b>X</b>

**Key**

- a = relative atomic mass
- X = atomic symbol
- b = proton (atomic) number

The volume of one mole of any gas is 24 dm<sup>3</sup> at room temperature and pressure (r.t.p.).

