



**Cambridge International Examinations**  
Cambridge Ordinary Level

CANDIDATE NAME

CENTRE NUMBER

CANDIDATE NUMBER



**BIOLOGY**  
Paper 2 Theory

**5090/21**  
**May/June 2015**  
**1 hour 45 minutes**

Candidates answer on the Question Paper.  
No Additional Materials are required.

**READ THESE INSTRUCTIONS FIRST**

Write your Centre number, candidate number and name on all the work you hand in.  
Write in dark blue or black pen.  
You may use an HB pencil for any diagrams or graphs.  
Do not use staples, paper clips, glue or correction fluid.  
**DO NOT WRITE IN ANY BARCODES.**

**Section A**  
Answer **all** questions in this section.  
Write your answers in the spaces provided on the Question Paper.

**Section B**  
Answer **both** questions in this section.  
Write your answers in the spaces provided on the Question Paper.

**Section C**  
Answer **either** question 8 **or** question 9.  
Write your answers in the spaces provided on the Question Paper.

You are advised to spend no longer than one hour on Section A.  
Electronic calculators may be used.  
You may lose marks if you do not show your working or if you do not use appropriate units.

At the end of the examination, fasten all your work securely together.  
The number of marks is given in brackets [ ] at the end of each question or part question.

This document consists of **16** printed pages.

Section A

Answer **all** questions in this section.

Write your answers in the spaces provided.

- 1 Fig. 1.1 shows a vertical section through the skin in two different environmental conditions, **A** and **B**.

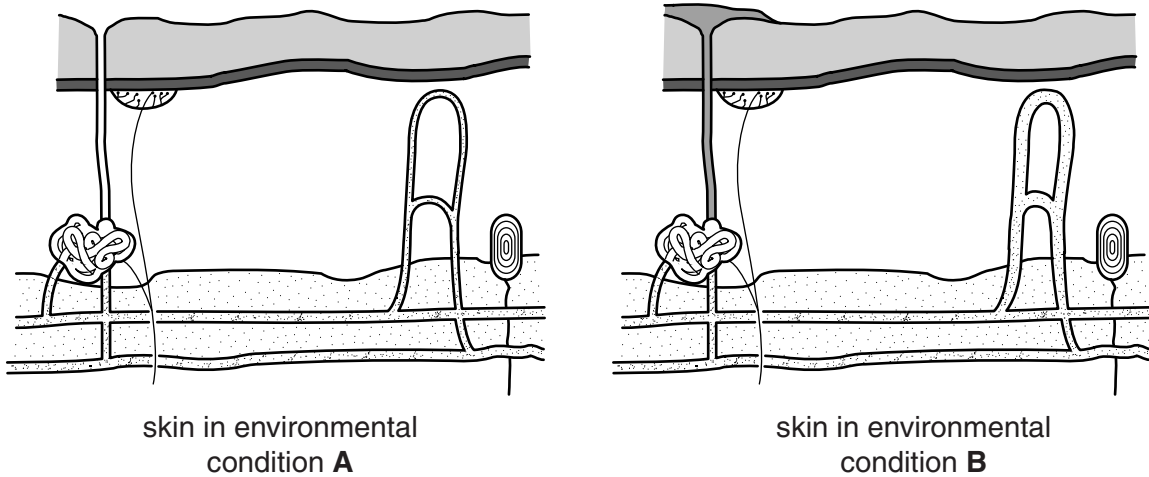


Fig. 1.1

- (a) On Fig. 1.1, label each of the following:

- a sweat gland
- a capillary.

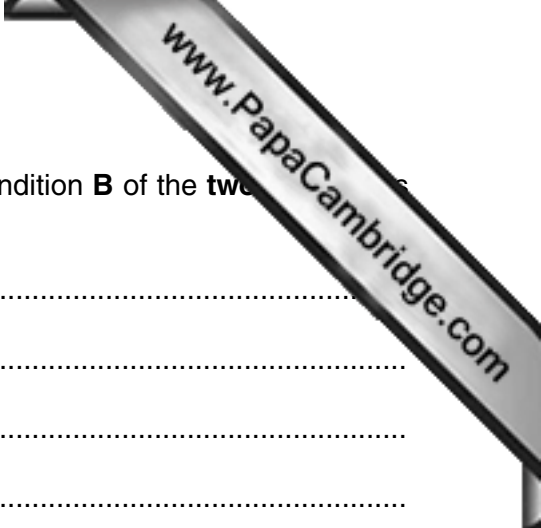
[2]

- (b) Use the information in Fig. 1.1 to suggest how environmental condition **B** is different from environmental condition **A**.

.....  
 ..... [1]

- (c) (i) State **two** differences between the skin in environmental condition **A** and the skin in environmental condition **B**.

1 .....  
 .....  
 2 .....  
 ..... [2]



(ii) Explain the advantages to a person in environmental condition **B** of the two you have stated in your answer to **(c)(i)**.

.....

.....

.....

.....

.....

.....

.....

.....

..... [3]

[Total: 8]

- 2 Table 2.1 shows the volume of blood supplied to parts of the body at rest and during strenuous exercise.

**Table 2.1**

part of body	volume of blood supplied in cm <sup>3</sup> /min	
	at rest	during strenuous exercise
brain	750	750
heart	250	750
skeletal muscle	1200	12500
skin	500	1900
kidneys	1100	.....
digestive organs	1400	600
other	600	400
<b>Total</b>	5800	17500

- (a) (i) Calculate the volume of blood that is supplied to the brain **at rest** as a percentage of the total supplied to the whole body.

Show your working in the space below.

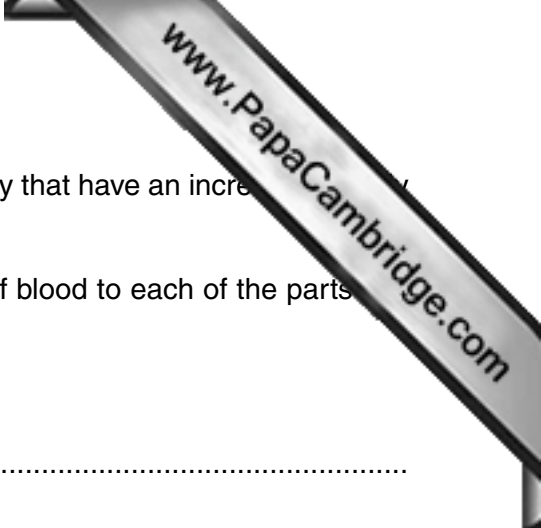
..... % [2]

- (ii) Name the blood vessels that supply each kidney with blood.

..... [1]

- (iii) Using the information in Table 2.1, calculate the volume of blood supplied to the kidneys during strenuous exercise.

Write your answer in the space provided in Table 2.1. [1]



(b) Use the information in Table 2.1 to name **two** parts of the body that have an increase in blood flow during strenuous exercise.

Explain the advantage to the body of increasing the supply of blood to each of the parts you name.

name of part .....

advantage .....

.....

.....

.....

name of part .....

advantage .....

.....

.....

..... [4]

(c) Using the information in Table 2.1, suggest why eating immediately before exercise is not recommended.

.....

.....

.....

..... [2]

[Total: 10]

- 3 Fig. 3.1 shows a fetus developing in the uterus of a mother. The fluid labelled **C** contains cells from the fetus.

A long, hollow needle may be used to withdraw some of the fluid into a syringe. The DNA from the cells in this fluid can then be analysed to find the sex of the fetus and to detect mutations.

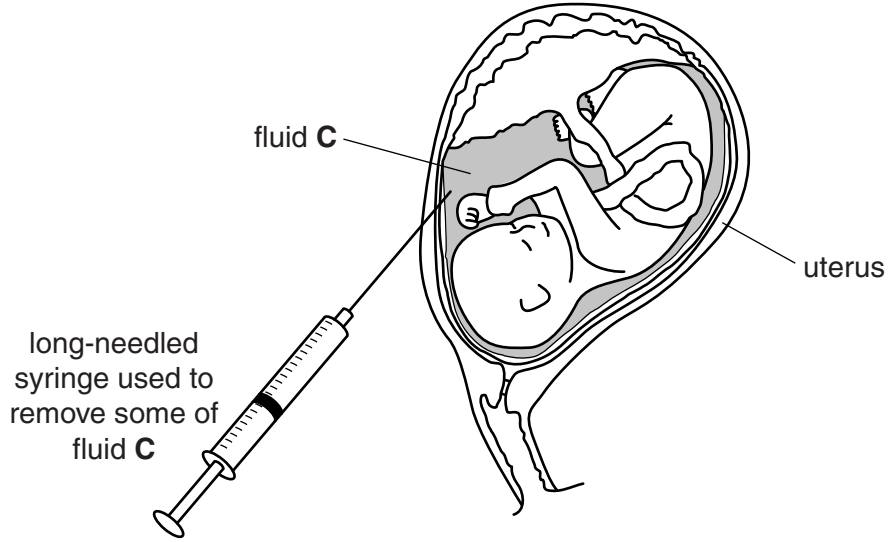


Fig. 3.1

- (a) Name fluid **C** and state its function.

name of fluid .....

function .....

..... [2]

- (b) (i) Label the placenta on Fig. 3.1 using a line and the letter **P**. [1]

- (ii) State **two** functions of the placenta.

1 .....

.....

2 .....

..... [2]

(c) Fig. 3.2 shows the chromosomes found in the nucleus of one cell of a developing

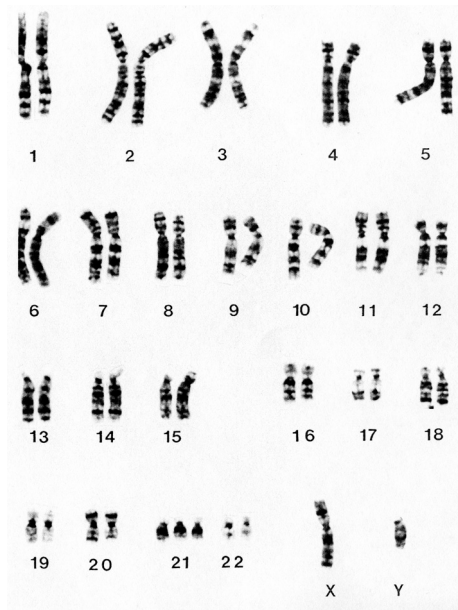


Fig. 3.2

State the sex of this fetus and explain your answer.

sex .....

explanation .....

..... [2]

(d) This fetus has a mutation.

(i) Describe the mutation shown in Fig. 3.2.

.....

.....

.....

..... [2]

(ii) Suggest the condition that this child could be born with as a result of this mutation.

..... [1]

[Total: 10]

4 (a) Define the term *drug*.

.....

.....

.....

..... [2]

(b) Fig. 4.1 shows some of the organs of a person that can be affected by the use of drugs.

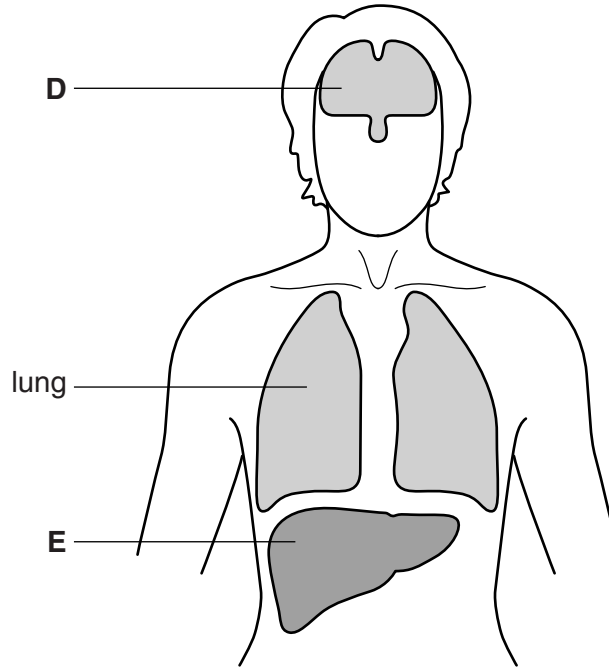


Fig. 4.1

Complete Table 4.1 by naming organs **D** and **E** and by giving **one** effect of each drug on the named organ.

Table 4.1

drug	organ label on Fig. 4.1	name of organ	one effect of drug
heroin	<b>D</b>		
alcohol	<b>E</b>		

[4]





(c) (i) Name **two** toxic components of tobacco smoke.

1 .....

2 .....

(ii) State the likely effect on her baby if a mother smokes tobacco throughout pregnancy.

.....  
.....  
..... [1]

[Total: 9]

5 Fig. 5.1 shows some of the interactions that take place in an aquatic ecosystem.

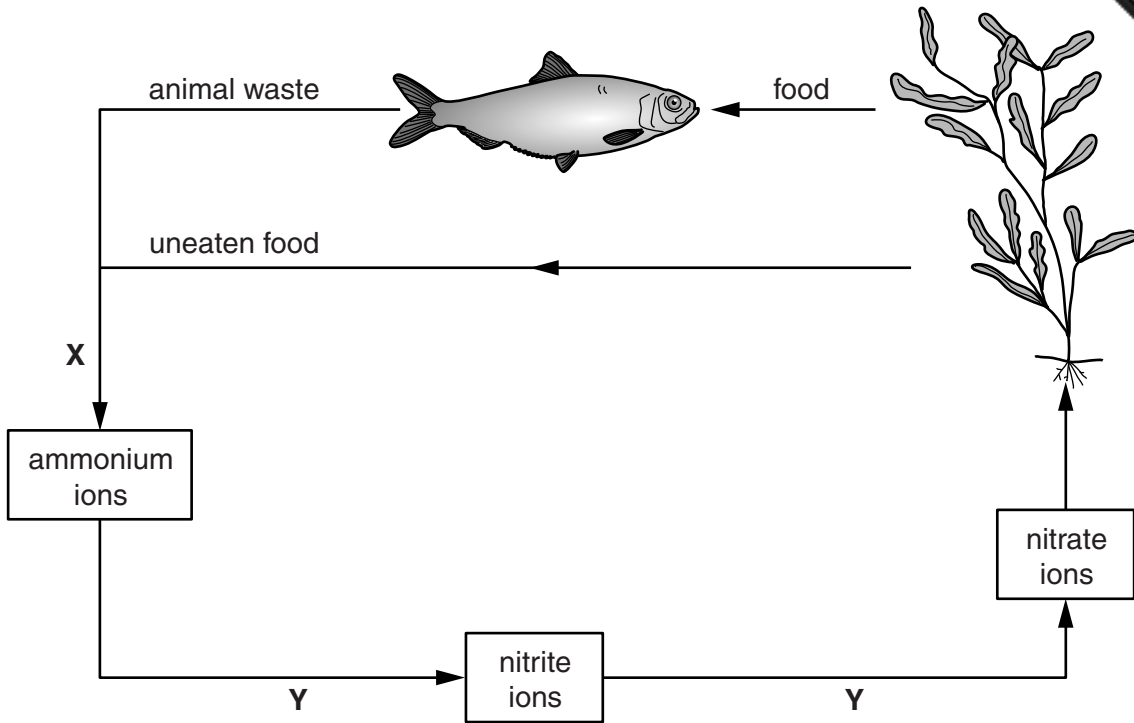


Fig. 5.1

(a) (i) Use the information in Fig. 5.1 to state each of the following:

the trophic level of the aquatic plant

.....

the trophic level of the fish

.....

the chemical element being cycled in this ecosystem.

.....

[3]

(ii) Explain **one** way, other than for food, that the fish may depend on the aquatic plant.

.....  
 .....  
 .....  
 .....

[2]

(b) (i) Name each of the processes represented by the letters **X** and **Y**.

process **X** .....

process **Y** .....

[2]



(ii) Name **one** type of microorganism that will carry out **both** process **X** and process **Y**.

.....

(iii) Explain how aquatic plants take up nitrate ions from their surroundings.

.....  
.....  
.....  
.....  
.....  
.....  
..... [3]

(c) Suggest what effect pollution by nitrogen-containing fertilisers might have on this ecosystem.


.....  
.....  
.....  
..... [2]

[Total: 13]

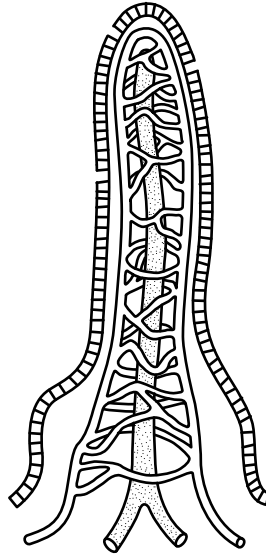
**Section B**

Answer **both** questions in this section.

Write your answers in the spaces provided.



- 6 Fig. 6.1 shows a structure found in part of the alimentary canal.




**Fig. 6.1**

- (a) Name the structure shown in Fig. 6.1 and state the part of the alimentary canal in which it is found.

name of structure.....

location in alimentary canal ..... [2]





7 (a) Describe the significance of each of the following features of a dicotyledonous leaf in the process named:

(i) the distribution of chloroplasts in the process of photosynthesis

.....  
.....  
.....  
.....  
.....  
.....  
.....  
.....  
..... [4]

(ii) stomata and mesophyll cells in the process of gas exchange.

.....  
.....  
.....  
.....  
.....  
..... [3]

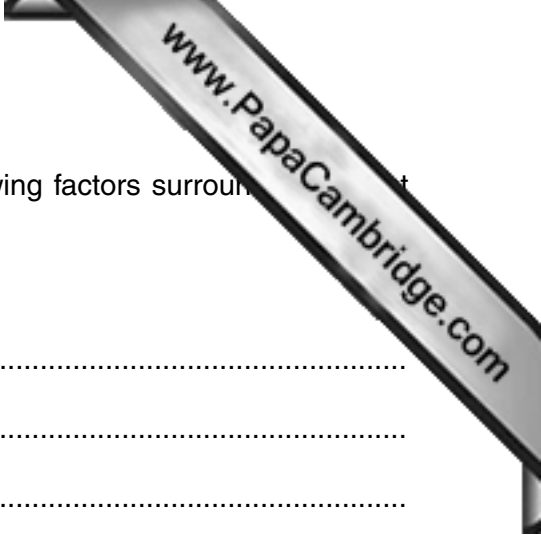
(b) Transverse sections were taken from the root and stem of a dicotyledonous plant.

Describe differences in how **two named** tissues involved in transport are arranged in each of these sections.

.....  
.....  
.....  
.....  
..... [3]

[Total: 10]





9 (a) Describe and explain how an **increase** in each of the following factors surrounding a plant affects the rate of transpiration:

- temperature

.....

.....

.....

.....

- light intensity

.....

.....

.....

.....

- humidity.

.....

.....

.....

.....

[7]

(b) Suggest the importance of transpiration to a plant.

.....

.....

.....

.....

.....

[3]

[Total: 10]

Permission to reproduce items where third-party owned material protected by copyright is included has been sought and cleared where possible. Every reasonable effort has been made by the publisher (UCLES) to trace copyright holders, but if any items requiring clearance have unwittingly been included, the publisher will be pleased to make amends at the earliest possible opportunity.

To avoid the issue of disclosure of answer-related information to candidates, all copyright acknowledgements are reproduced online in the Cambridge International Examinations Copyright Acknowledgements Booklet. This is produced for each series of examinations and is freely available to download at [www.cie.org.uk](http://www.cie.org.uk) after the live examination series.

Cambridge International Examinations is part of the Cambridge Assessment Group. Cambridge Assessment is the brand name of University of Cambridge Local Examinations Syndicate (UCLES), which is itself a department of the University of Cambridge.