

CANDIDATE
NAME

CENTRE
NUMBER

--	--	--	--	--	--

CANDIDATE
NUMBER

--	--	--	--	--



BUSINESS STUDIES

Paper 1

7115/12

May/June 2014

1 hour 45 minutes

Candidates answer on the Question Paper.

No Additional Materials are required.

READ THESE INSTRUCTIONS FIRST

Write your Centre number, candidate number and name on all the work you hand in.

Write in dark blue or black pen.

Do not use staples, paper clips, glue or correction fluid.

DO NOT WRITE IN ANY BARCODES.

Answer **all** questions.

The businesses described in this question paper are entirely fictitious.

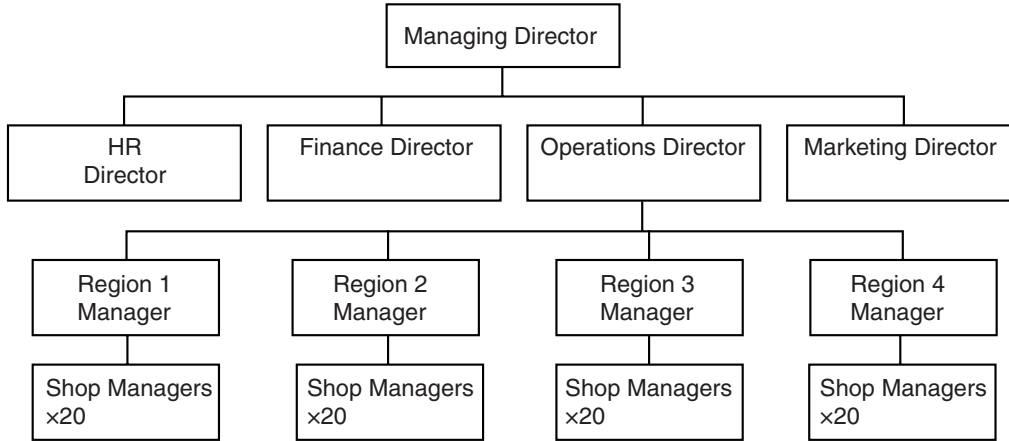
At the end of the examination, fasten all your work securely together.

The number of marks is given in brackets [] at the end of each question or part question.

This document consists of **11** printed pages and **1** blank page.

- 1 LEK owns 80 electrical shops. It sells products such as cell (mobile) phones and televisions. The Marketing Director believes offering customers a choice of products helps LEK to be competitive. LEK must use suitable ways to communicate with its customers. LEK's directors are planning the takeover of a competitor. This competitor owns 40 shops and operates in the same 4 regions as LEK.

Fig. 1: LEK organisational chart



- (a) What is meant by ‘span of control’?

.....
 [2]

- (b) Identify **two** factors (other than offering choice and having good communication) which could help make LEK more competitive.

Factor 1:

 Factor 2:
 [2]

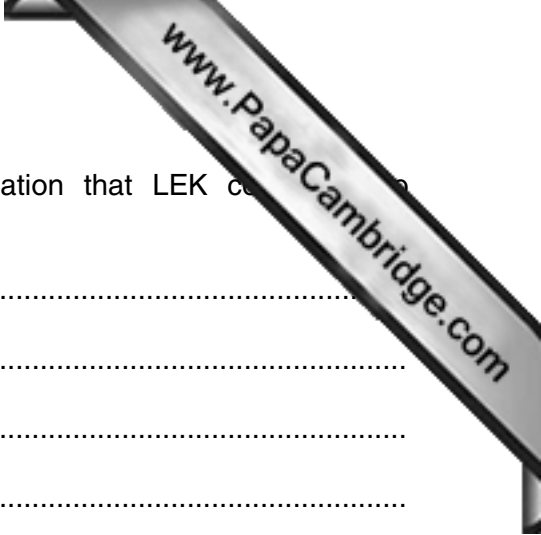
- (c) Identify and explain **two** benefits to LEK of having an organisational chart.

Benefit 1:

 Explanation:

 Benefit 2:

 Explanation:
 [4]



(d) Identify and explain **two** suitable methods of communication that LEK could use to communicate with its customers.

Method 1:

Explanation:

.....

.....

.....

.....

Method 2:

Explanation:

.....

.....

.....

.....[6]

(e) Do you think that the takeover of the competitor would benefit LEK? Justify your answer.

.....

.....

.....

.....

.....

.....

.....

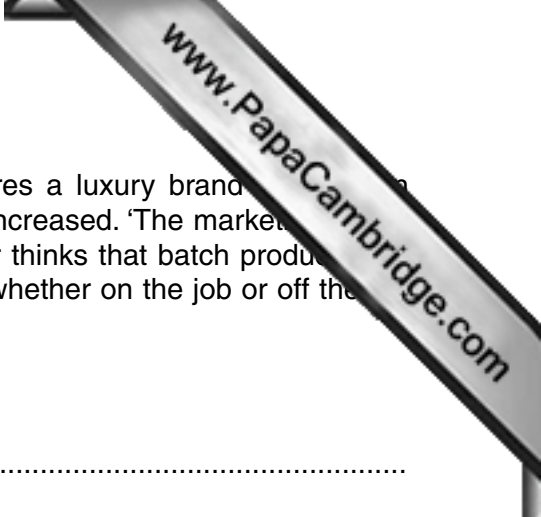
.....

.....

.....

.....

.....[6]



2 Cutter is a family owned private limited company. It manufactures a luxury brand of shoes. In 2013 sales revenue increased by \$3m and retained profits also increased. 'The market is working' said the Marketing Director. Cutter's Operations Director thinks that batch production is still the right method of production to use, but he cannot decide whether on the job or off the job training is better for the business.

(a) What is meant by 'retained profit'?

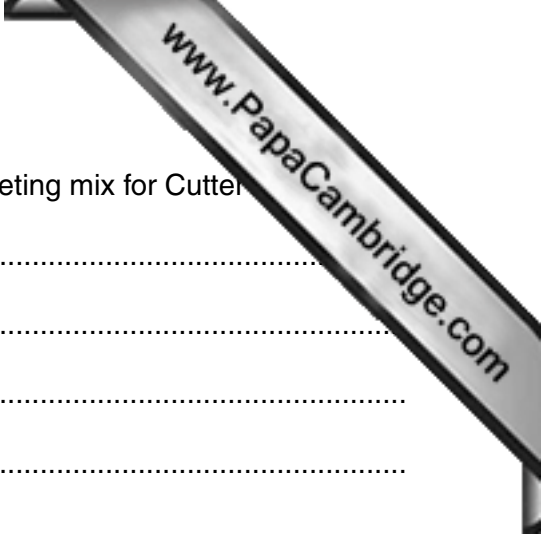
.....
.....
.....
.....[2]

(b) Identify **two** possible advantages to Cutter of being a private limited company.

Advantage 1:
.....
Advantage 2:
.....[2]

(c) Identify and explain **two** possible advantages to Cutter of using batch production.

Advantage 1:
.....
Explanation:
.....
Advantage 2:
.....
Explanation:
.....[4]



(d) Identify and explain **two** possible elements of a suitable marketing mix for Cutter

Element 1:

Explanation:

.....
.....
.....
.....

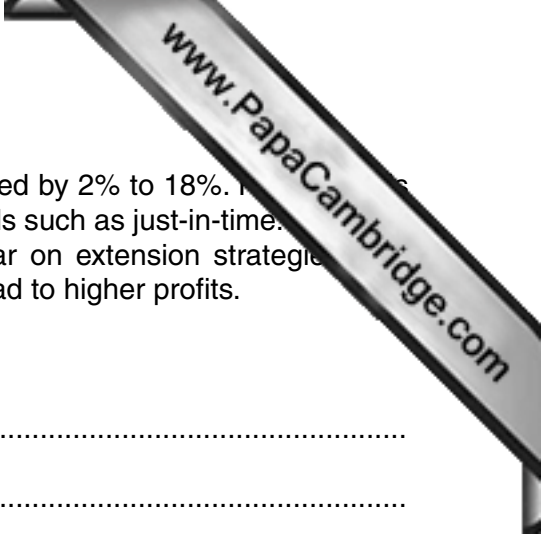
Element 2:

Explanation:

.....
.....
.....
..... [6]

(e) Do you think it is better for Cutter to use on the job or off the job training? Justify your answer.

.....
.....
.....
.....
.....
.....
.....
.....
.....
.....
.....
.....
.....
.....
.....
.....
.....
.....
..... [6]



3 SENG manufactures cameras. Last year its market share increased by 2% to 18%. It is capital intensive. This allows SENG to use lean production methods such as just-in-time. They have a short product life cycle. SENG spends \$200m each year on extension strategies. Marketing manager thinks that an increase in market share will lead to higher profits.

(a) What is meant by 'capital intensive?'


.....
.....
.....
.....[2]

(b) Identify **two** possible reasons why cameras might have a short product life cycle.

Reason 1:
.....
Reason 2:
.....[2]

(c) Identify and explain **two** possible advantages to SENG of using lean production.

Advantage 1:
.....
Explanation:
.....
Advantage 2:
.....
Explanation:
.....[4]



(d) Identify and explain **two** possible extension strategies that SENG could use to sell different types of camera.

Strategy 1:

.....

Explanation:

.....

.....

.....

Strategy 2:

.....

Explanation:

.....

.....

.....[6]

(e) Do you think that an increase in market share will always lead to higher profits for SENG? Justify your answer.

.....

.....

.....

.....

.....

.....

.....

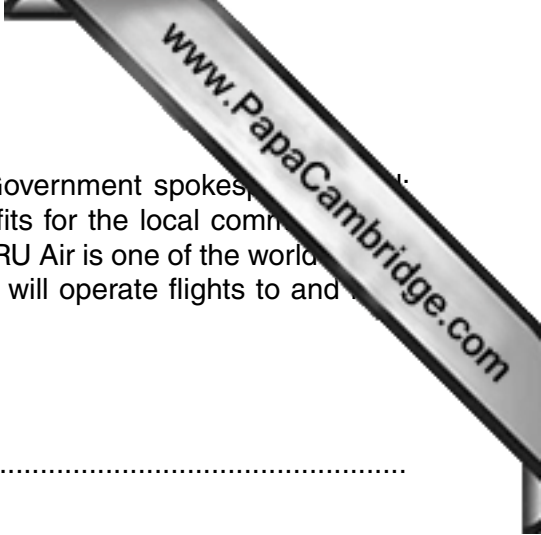
.....

.....

.....

.....

.....[6]



4 The Government of country B plans to build a new airport. A Government spokesman says, 'There will be external costs, but I think there will be more benefits for the local community. We have to support businesses such as airlines in the private sector'. RU Air is one of the world's most profitable airlines. RU has announced plans on its website that it will operate flights to and from country B in the future. RU is a public limited company.

(a) What is meant by the 'private sector'?


.....
.....
.....
.....[2]

(b) Identify **two** ways the Government might support RU Air and other private sector business activity (other than by building a new airport).

Way 1:
.....
Way 2:
.....[2]

(c) Identify and explain **two** benefits to RU Air of high profits.

Benefit 1:
.....
Explanation:
.....
Benefit 2:
.....
Explanation:
.....[4]



(d) Identify and explain **two** benefits for RU Air of having a website.

Benefit 1:
.....

Explanation:
.....
.....

Benefit 2:
.....

Explanation:
.....
.....
..... [6]

(e) Do you agree that there are likely to be more advantages for the local community from the new airport than disadvantages? Justify your answer.

.....
.....
.....
.....
.....
.....
.....
.....
.....
.....
.....
.....
.....
.....
.....
.....
.....
.....
..... [6]



5 Anyshade manufactures a range of paints. It uses flow production. The Finance manager has produced a cash flow forecast as the business wants to arrange an overdraft with the bank. The Finance manager believes that reducing prices is the best way to increase sales revenue. Anyshade's paints are well known for quality.

Table 1: Cash flow forecast (\$000's)

	July	August	September
Opening balance	(9 000)	6 000	Y
Cash inflows:			
Cash sales	90 000	30 000	50 000
Cash from debtors	50 000	80 000	70 000
Total cash inflows	140 000	110 000	120 000
Cash outflows:			
Fixed costs	70 000	70 000	70 000
Wages	20 000	18 000	19 000
Raw materials	35 000	30 000	30 000
Total cash outflows	125 000	118 000	119 000
Net cash flow	X	(8 000)	1 000
Closing balance	6 000	(2 000)	(1 000)

Note: numbers in brackets are negative.

(a) What is meant by an 'overdraft'?

.....
[2]

(b) Calculate the following.

July net cash flow (X):

September opening balance (Y):
[2]

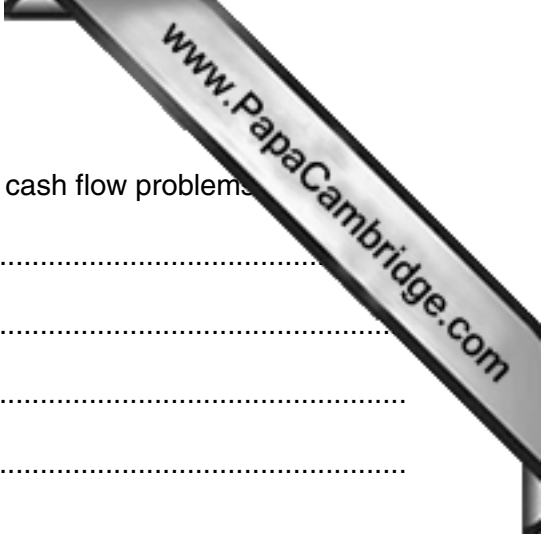
(c) Identify and explain **two** advantages to Anyshade of using flow production.

Advantage 1:

Explanation:

Advantage 2:

Explanation:
[4]



(d) Identify and explain **two** possible reasons why Anyshade has cash flow problems

Reason 1:
.....

Explanation:
.....
.....

Reason 2:
.....

Explanation:
.....
.....
..... [6]

(e) Anyshade’s Finance manager believes that reducing prices is the best way to increase sales revenue. Do you agree? Justify your answer.

.....
.....
.....
.....
.....
.....
.....
.....
.....
.....
.....
.....
.....
.....
.....
.....
.....
.....
..... [6]

Permission to reproduce items where third-party owned material protected by copyright is included has been sought and cleared where possible. Every reasonable effort has been made by the publisher (UCLES) to trace copyright holders, but if any items requiring clearance have unwittingly been included, the publisher will be pleased to make amends at the earliest possible opportunity.

Cambridge International Examinations is part of the Cambridge Assessment Group. Cambridge Assessment is the brand name of University of Cambridge Local Examinations Syndicate (UCLES), which is itself a department of the University of Cambridge.