



UNIVERSITY OF CAMBRIDGE INTERNATIONAL EXAMINATIONS
General Certificate of Education Ordinary Level

www.PapaCambridge.com

GEOGRAPHY

2217/22

Paper 2

October/November 2013

INSERT

2 hours 15 minutes

READ THESE INSTRUCTIONS FIRST

This Insert contains Photographs A and B for Question 3, Fig. 8, Table 3 and Photograph C for Question 7, and Figs 12, 13 and Table 5 for Question 8.

The Insert is **not** required by the Examiner.

This document consists of **9** printed pages and **3** blank pages.



Photograph A for Question 3

Lahore



Photograph B for Question 3

Atari



Fig. 8 for Question 7

Measuring velocity

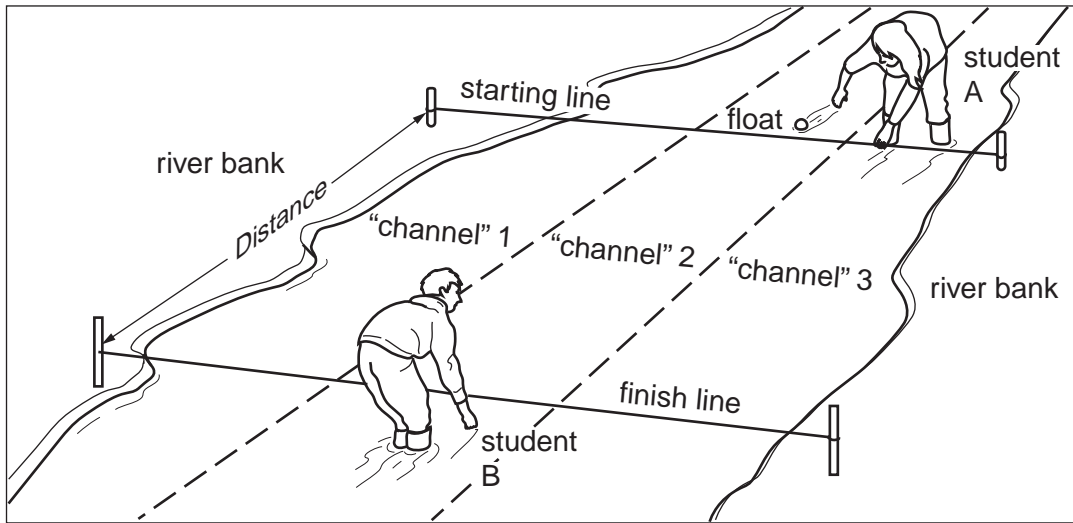


Table 3 for Question 7

Results of fieldwork

Site	Distance from source (km)	Average velocity (m/s)	Hydraulic radius
1	1.8	0.36	0.05
2	3.2	0.40	0.09
3	5.8	0.62	0.16
4	7.8	0.60	0.28
5	10.5	0.78	0.50

Photograph C for Question 7

www.PapaCambridge.com



Fig. 12 for Question 8

A model of urban land-use

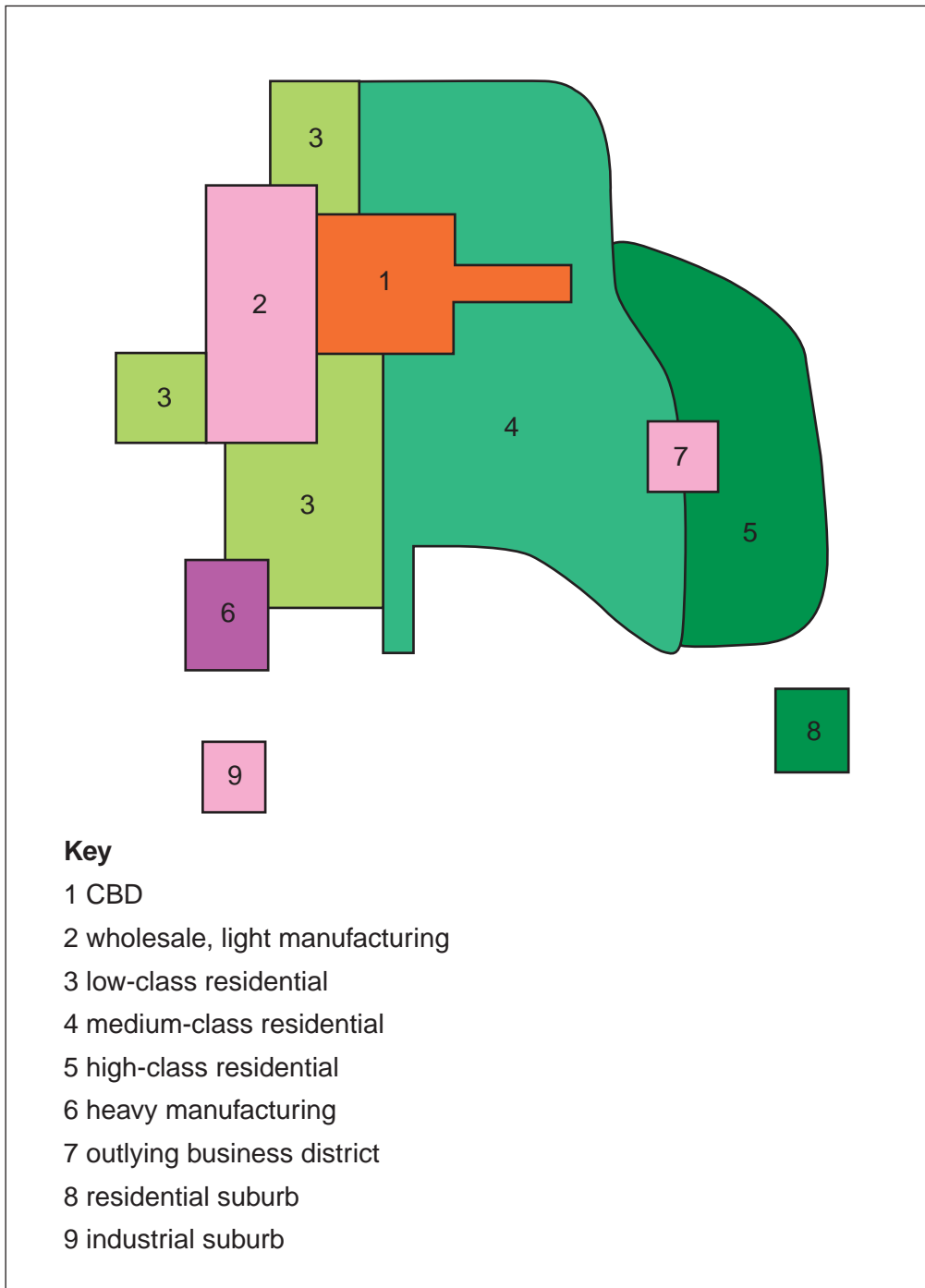


Fig. 13 for Question 8

Results of the students' fieldwork

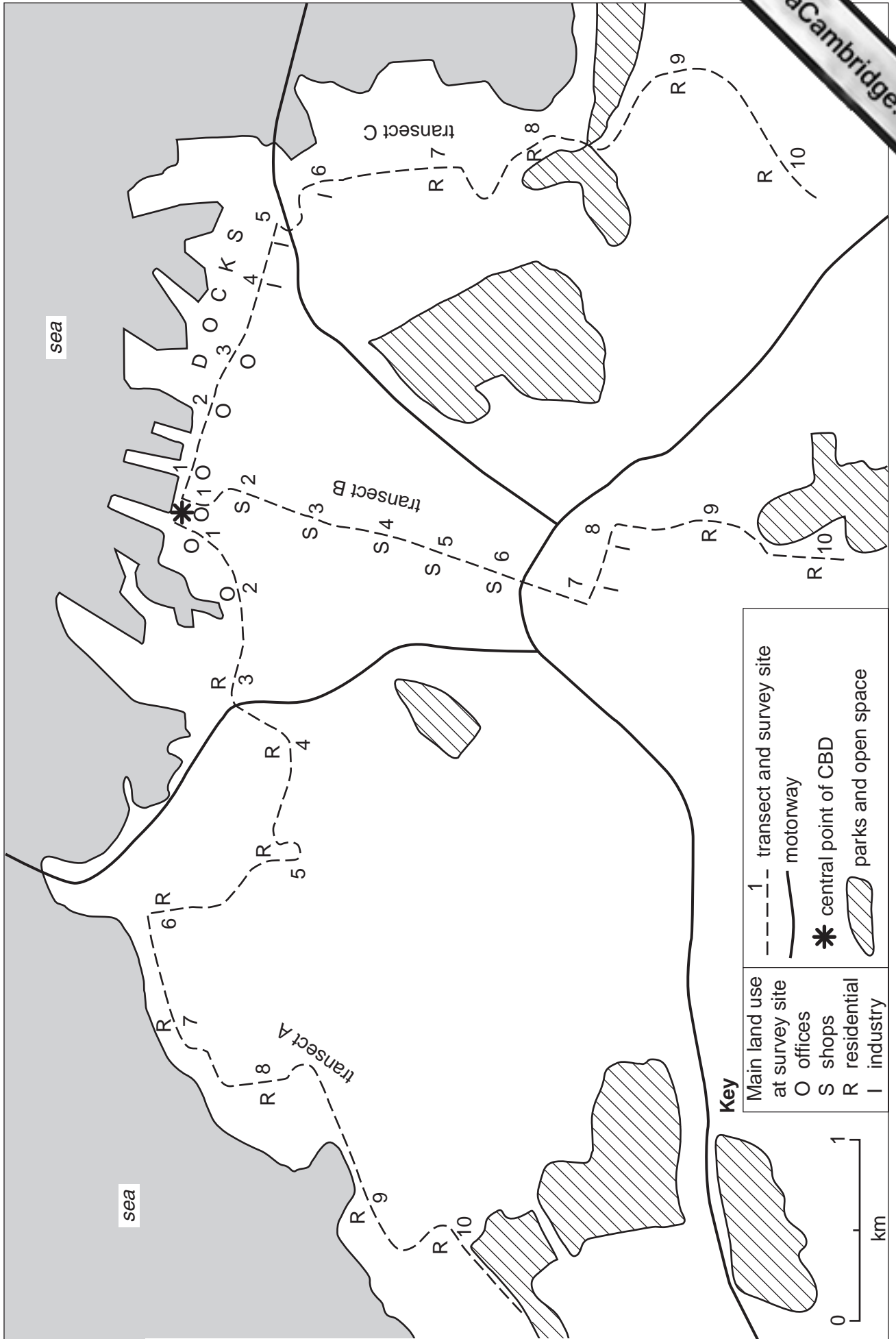


Table 5 for Question 8
Main type of land use and average number of storeys at each site

Transect A

	CBD ← → Edge of city									
Site	1	2	3	4	5	6	7	8	9	10
Main type of land use	Offices	Offices	Residential	Residential	Residential	Residential	Residential	Residential	Residential	Residential
Average number of storeys	18	14	3	2	2	2	2	2	1	1

Transect B

	CBD ← → Edge of city									
Site	1	2	3	4	5	6	7	8	9	10
Main type of land use	Offices	Shops	Shops	Shops	Shops	Shops	Industry	Industry	Residential	Residential
Average number of storeys	18	17	14	8	6	4	2	1	2	1

Transect C

	CBD ← → Edge of city									
Site	1	2	3	4	5	6	7	8	9	10
Main type of land use	Offices	Offices	Offices	Industry	Industry	Industry	Residential	Residential	Residential	Residential
Average number of storeys	16	12	10	4	3	4	2	2	2	1

