

CANDIDATE  
NAME

CENTRE  
NUMBER

--	--	--	--	--

CANDIDATE  
NUMBER

--	--	--	--

**GEOGRAPHY**

**2217/22**

Paper 2

**October/November 2018**

**2 hours 15 minutes**

Candidates answer on the Question Paper.

Additional Materials:      Ruler  
   Calculator  
   Protractor  
   Plain paper

1:50 000 Survey Map Extract is enclosed with this question paper.

**READ THESE INSTRUCTIONS FIRST**

Write your Centre number, candidate number and name in the spaces provided.

Write in dark blue or black pen.

You may use an HB pencil for any diagrams or graphs.

Do not use staples, paper clips, glue or correction fluid.

**DO NOT WRITE IN ANY BARCODES.**

Write your answer to each question in the space provided. If additional space is required, you should use the lined pages at the end of the booklet. The question number(s) must be clearly shown.

**Section A**

Answer **all** questions.

**Section B**

Answer **one** question.

The Insert contains Fig. 3.1 for Question 3, Figs. 7.1, 7.2 and 7.3 and Tables 7.1 and 7.2 for Question 7, and Figs. 8.2, 8.3 and Tables 8.1 and 8.2 for Question 8.

The Survey Map Extract and the Insert are **not** required by the Examiner.

Sketch maps and diagrams should be drawn whenever they serve to illustrate an answer.

At the end of the examination, fasten all your work securely together.

The number of marks is given in brackets [ ] at the end of each question or part question.

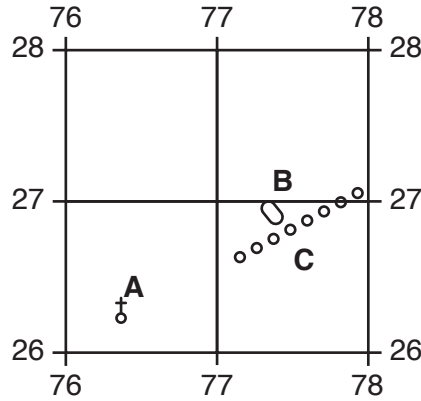
This document consists of **28** printed pages, **4** blank pages and **1** Insert.

**Section A**

Answer **all** questions in this section.

**1** Study the map extract of Katlenburg-Lindau, Germany. The scale is 1:50 000.

**(a)** Fig. 1.1 shows some of the features in the north west part of the map extract.



**Fig. 1.1**

Using the map extract, identify the following features shown on Fig. 1.1:

- feature **A**

.....

- feature **B**

.....

- feature **C**.

..... [3]

**(b) (i)** Describe the direction of flow and physical features of the River Rhume.

.....  
.....  
.....  
.....  
.....  
.....  
.....  
.....  
.....  
.....  
..... [5]

(ii) Give the six-figure grid reference of the point where the River Söse flows into the River Rhume in the north west of the map extract.

..... [1]

(c) Describe the site of Lindau and suggest why a settlement has developed here.

.....  
.....  
.....  
.....  
.....  
.....  
.....  
.....  
.....  
.....  
.....  
.....  
.....  
.....  
.....  
.....  
.....  
.....  
.....  
.....  
..... [6]

(d) (i) Measure the distance along the 15L road from 811233 to the edge of the map at 860202. Give your answer in metres.

..... [1]

(ii) Describe the relief and land use along the route of the 15L road from 811233 to 860202.

.....  
.....  
.....  
.....  
.....  
.....  
.....  
.....  
.....  
.....  
.....  
.....  
..... [4]

[Total: 20]

2 Study Fig. 2.1, which shows population growth, in different regions of the world, between 1960 and 2100 (estimated).

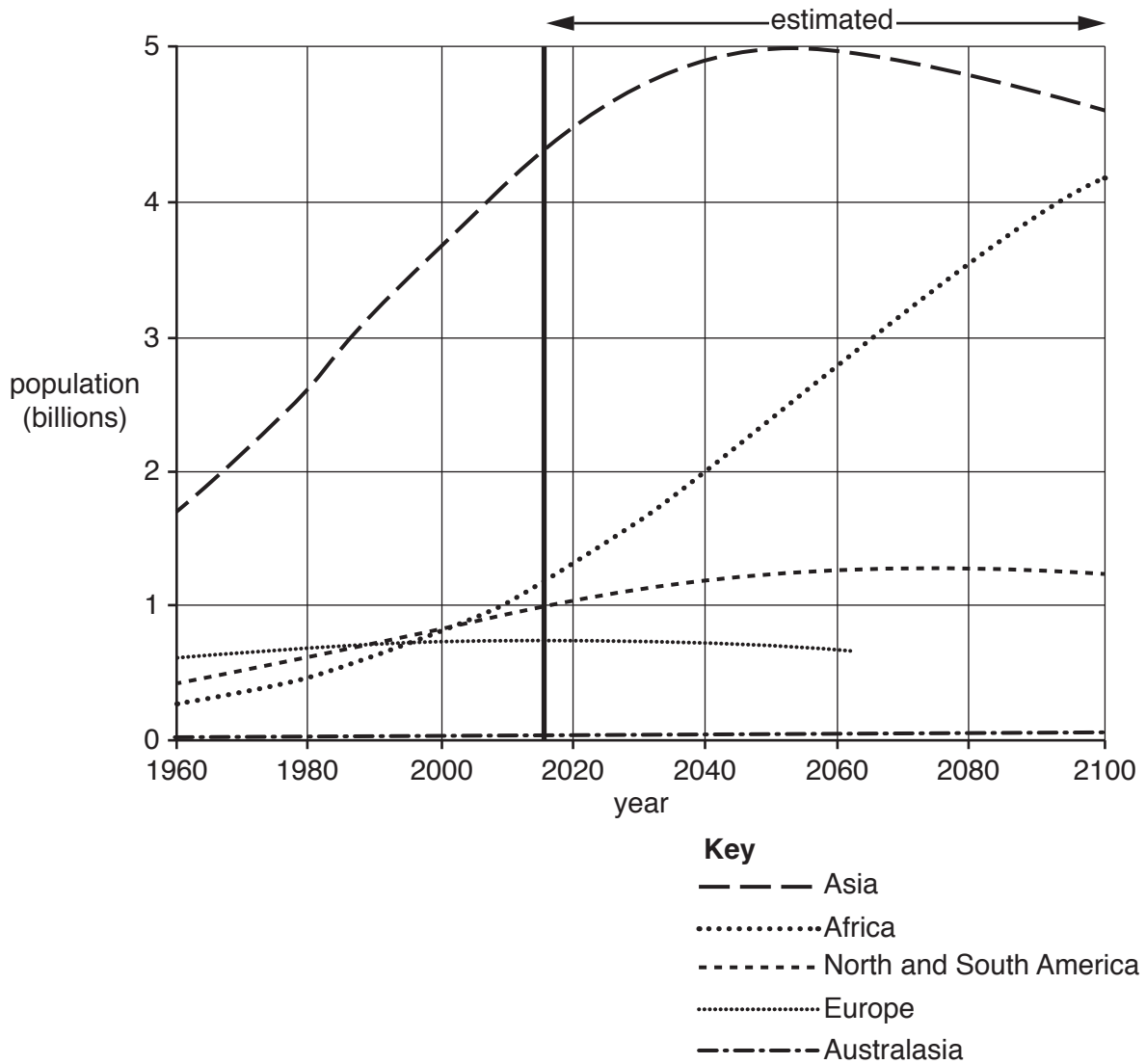


Fig. 2.1

(a) (i) How is **natural** population growth calculated?

.....[1]

(ii) State another factor which affects the **overall** population growth of a region.

.....[1]

(b) On Fig. 2.1, **complete** the line for Europe to show that the decrease from 2040 to 2060 is expected to continue at the same rate to 2100. [1]

- (c) (i) Which area is expected to show a continually increasing population?  
.....[1]
- (ii) In which year is the population of Asia expected to start to decrease?  
.....[1]
- (iii) In which year did the population of Africa become larger than the population of North and South America?  
.....[1]
- (iv) Asia is the region with the largest population for all years shown on the graph. Which region is likely to have a larger population than Asia after 2100? Justify your answer.  
.....  
.....  
.....  
.....[2]

[Total: 8]

3 Study Fig. 3.1 (Insert), which is a photograph of part of an urban area in Africa.

(a) Describe the buildings shown in Fig. 3.1.

.....

.....

.....

.....

.....

.....

.....

.....

..... [4]

(b) Suggest **two** advantages and **two** disadvantages of living in buildings such as those shown in Fig. 3.1.

Advantages

.....

.....

.....

.....

Disadvantages

.....

.....

.....

..... [4]

[Total: 8]

**BLANK PAGE**

- 4 Study Fig. 4.1, which shows wind direction and days with rain, for a town, in June 2016, and Fig. 4.2, which shows the location of the town.

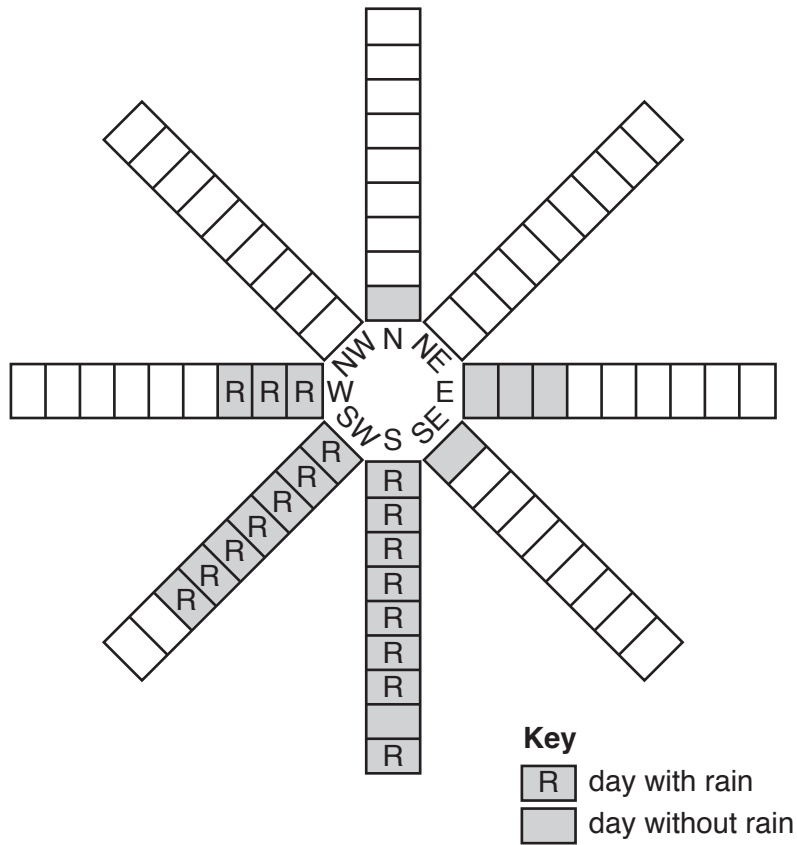


Fig. 4.1

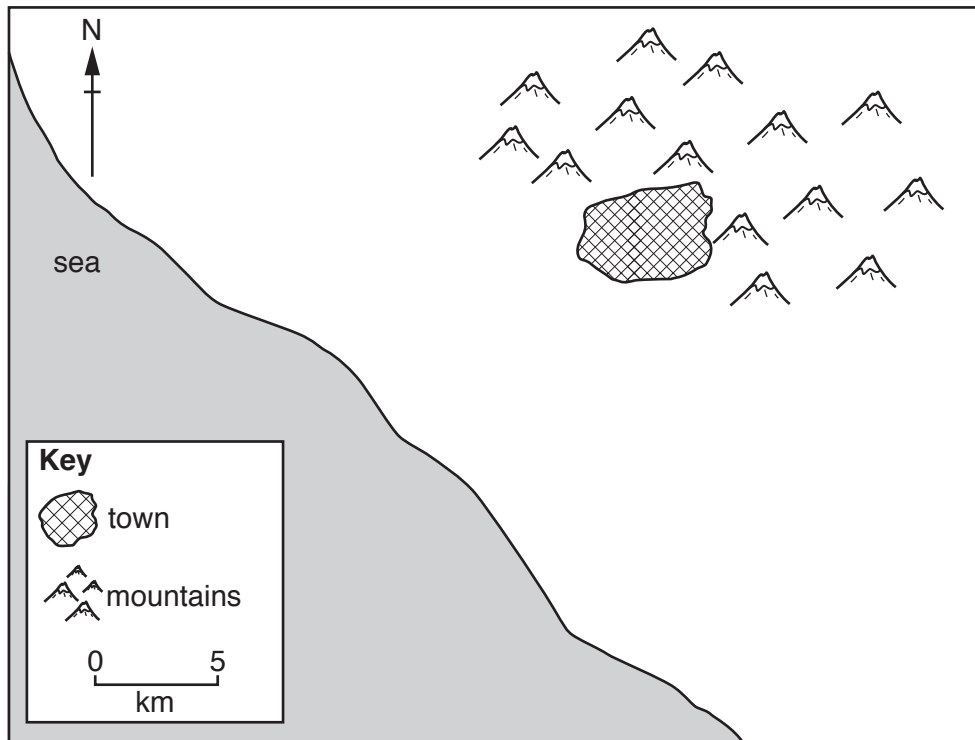


Fig. 4.2



- (a) Which **two** instruments would have been used to collect the data in Fig. 4.1?  
.....[2]
- (b) **Complete** Fig. 4.1 to show that the wind was from the north west on six days and that on four of those days it rained. [2]
- (c) (i) What was the prevailing wind direction during June 2016?  
.....[1]
- (ii) Which **two** wind directions always caused rainy weather?  
.....[1]
- (iii) Suggest why there was rain when the wind was blowing from these directions.  
.....  
.....  
.....  
.....[2]

[Total: 8]

5 Study Fig. 5.1, which shows a plate boundary in California, USA.

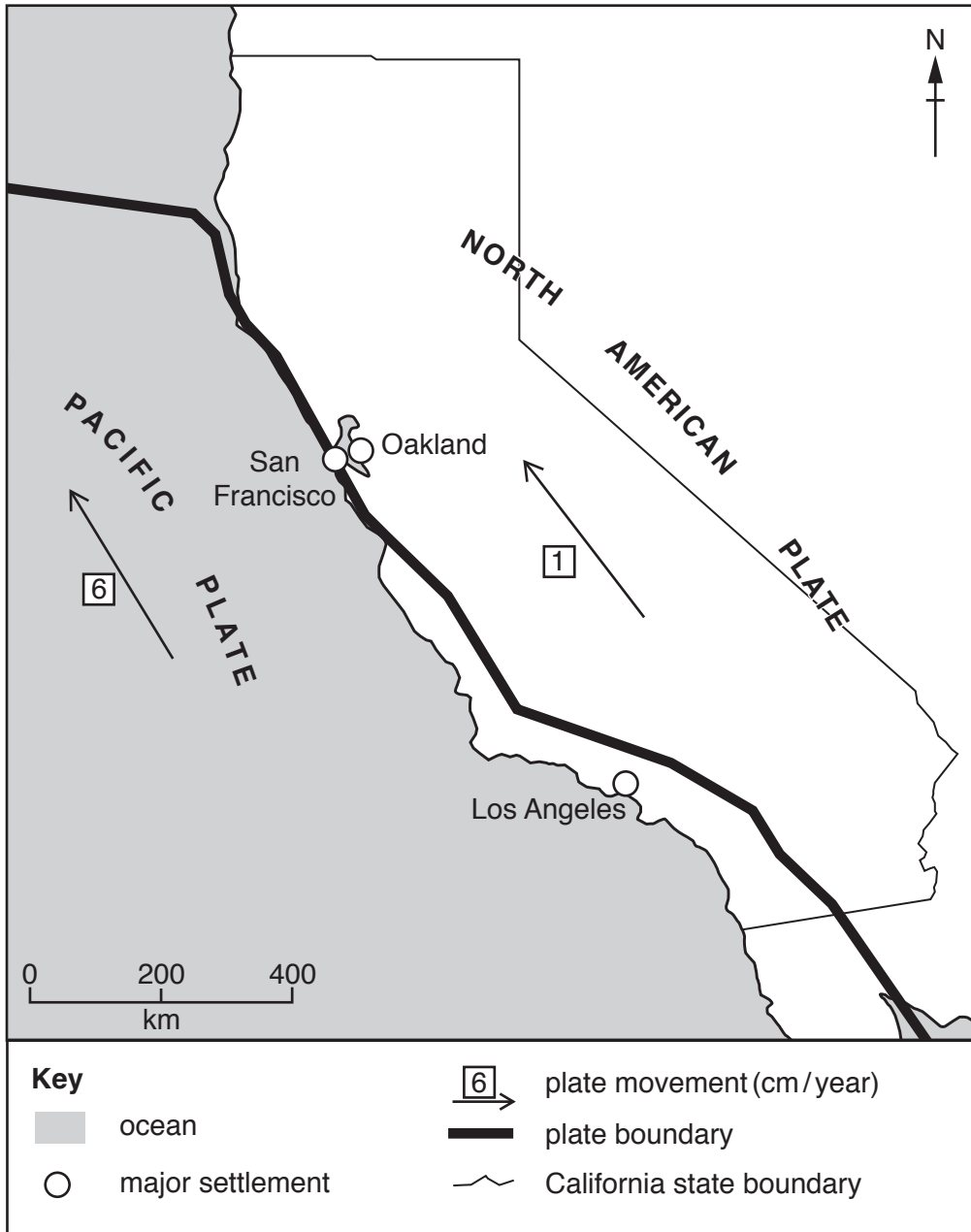


Fig. 5.1

(a) (i) Describe the movements of the two plates shown on Fig. 5.1.

.....

.....

.....

..... [2]

(ii) What type of plate boundary is this? Circle the correct answer.

conservative      constructive      destructive      [1]

(b) (i) Describe the location of the major settlements shown on Fig. 5.1.

.....  
.....  
.....  
..... [2]

(ii) Suggest why many people choose to live in these settlements.

.....  
.....  
.....  
.....  
.....  
..... [3]

[Total: 8]

6 Study Fig. 6.1, which shows the risk of soil erosion in Europe.

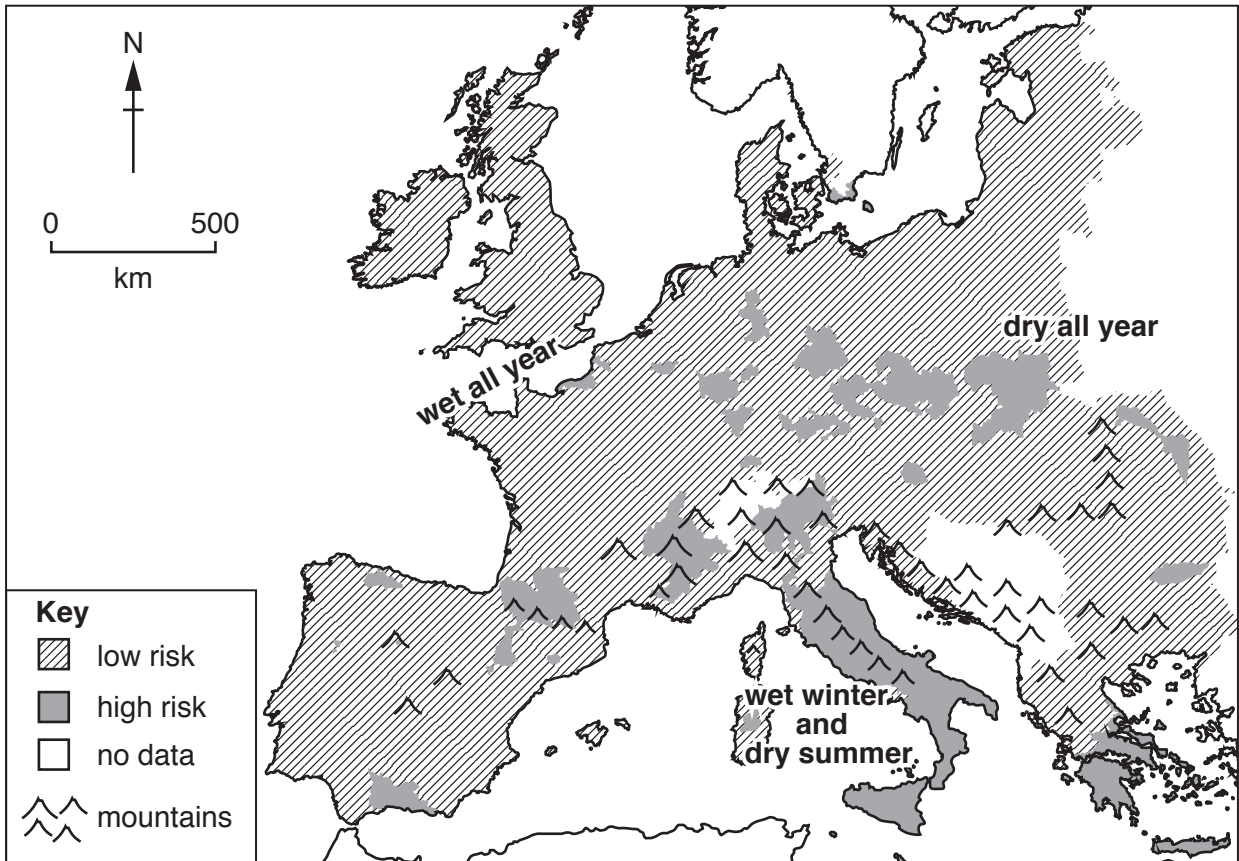


Fig. 6.1

(a) Describe the distribution of areas with a high risk of soil erosion.

.....

.....

.....

.....

.....

.....

.....

.....

.....

.....

.....[3]

(b) (i) Which climate is likely to have the greatest soil erosion by **water**? Tick **one** answer.

	Tick (✓)
dry all year	
wet all year	
wet winter and dry summer	

[1]

(ii) Which climate is likely to have the greatest soil erosion by **wind**? Tick **one** answer.

	Tick (✓)
dry all year	
wet all year	
wet winter and dry summer	

[1]

(iii) Suggest why soils in mountain areas are vulnerable to soil erosion.

.....

.....

.....

..... [2]

(c) Which of the following strategies will give farmland most protection from soil erosion? Tick **one** answer.

	Tick (✓)
growing the same crop each year	
maintaining continuous vegetation cover	
maintaining the maximum herd size that the land will support	
ploughing up and down the slope	

[1]

[Total: 8]

**Section B**

Answer **one** question from this section.

7 Students from a college in Kenya were studying farming in their country. Farming in Kenya is varied with different crops grown and different types of livestock kept. For their study the students did research in villages in two farming areas, one in the north and one in the south of the Makueni district.

(a) Farming in Kenya is both commercial and subsistence. What do these two terms mean?

Commercial farming

.....  
.....

Subsistence farming

.....  
..... [2]

(b) Fig. 7.1 (Insert) shows the four main crops grown in Kenya for export.

(i) How much wheat was grown in 2012?

..... thousand tonnes [1]

(ii) Compare the change in production of tea and maize between 2011 and 2014. Do **not** use statistics.

.....  
.....  
.....  
..... [2]

The students tested the following hypotheses:

**Hypothesis 1:** *Land use on farms is different between the area in the north and the area in the south.*

**Hypothesis 2:** *The main difficulties for farmers in the two areas are environmental.*

(c) Fig. 7.2 (Insert) is a map and description of the areas investigated. Which village shown on Fig. 7.2 is described below?

The village is located in the dry lowland area about 18 km from the main road between Nairobi and Mombasa.

Name of village: ..... [1]

(d) To investigate the two hypotheses the students used a questionnaire with 20 farmers in each area. The questionnaire is shown in Fig. 7.3 (Insert).

(i) First they carried out a pilot study with farmers in a village near to their college. Explain why this is a good fieldwork technique.

.....  
.....  
.....  
..... [2]

(ii) The students took a random sample of 20 farms in each area. Give **one** advantage and **one** disadvantage of random sampling.

Advantage

.....  
.....

Disadvantage

.....  
..... [2]

(iii) Name and describe **one** other sampling method the students could have used to choose the farms.

Name of sampling method: .....

Description

.....  
.....  
.....  
..... [3]

(e) A questionnaire is one method used to collect primary data.

(i) What is meant by *primary data*?

.....  
..... [1]

(ii) Suggest **two** practical difficulties for the students of using a questionnaire to collect data in the farming areas.

1 .....

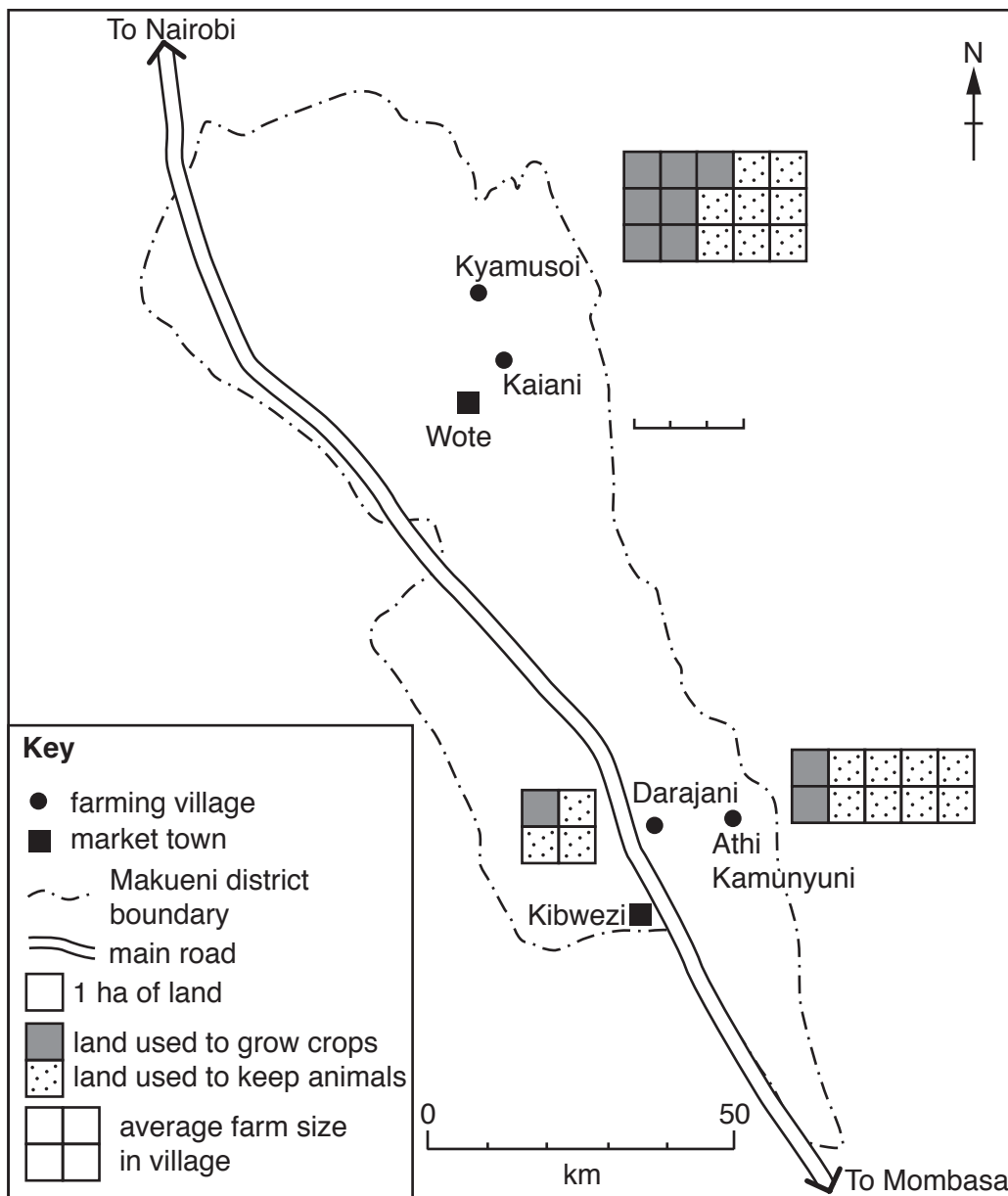
.....

2 .....

..... [2]

(f) (i) The results of Questions 1 to 4 in the questionnaire are shown in Table 7.1 (Insert). **Plot the results** for Questions 1, 2 and 3 for Kaiani on Fig. 7.4 below. [2]

**Land use on farms in four villages in Makueni**



**Fig. 7.4**



(ii) What conclusion would the students make about **Hypothesis 1**: *Land use on farms is different between the area in the north and the area in the south*? Support your decision with evidence from Fig. 7.4 and Table 7.1.

.....

.....

.....

.....

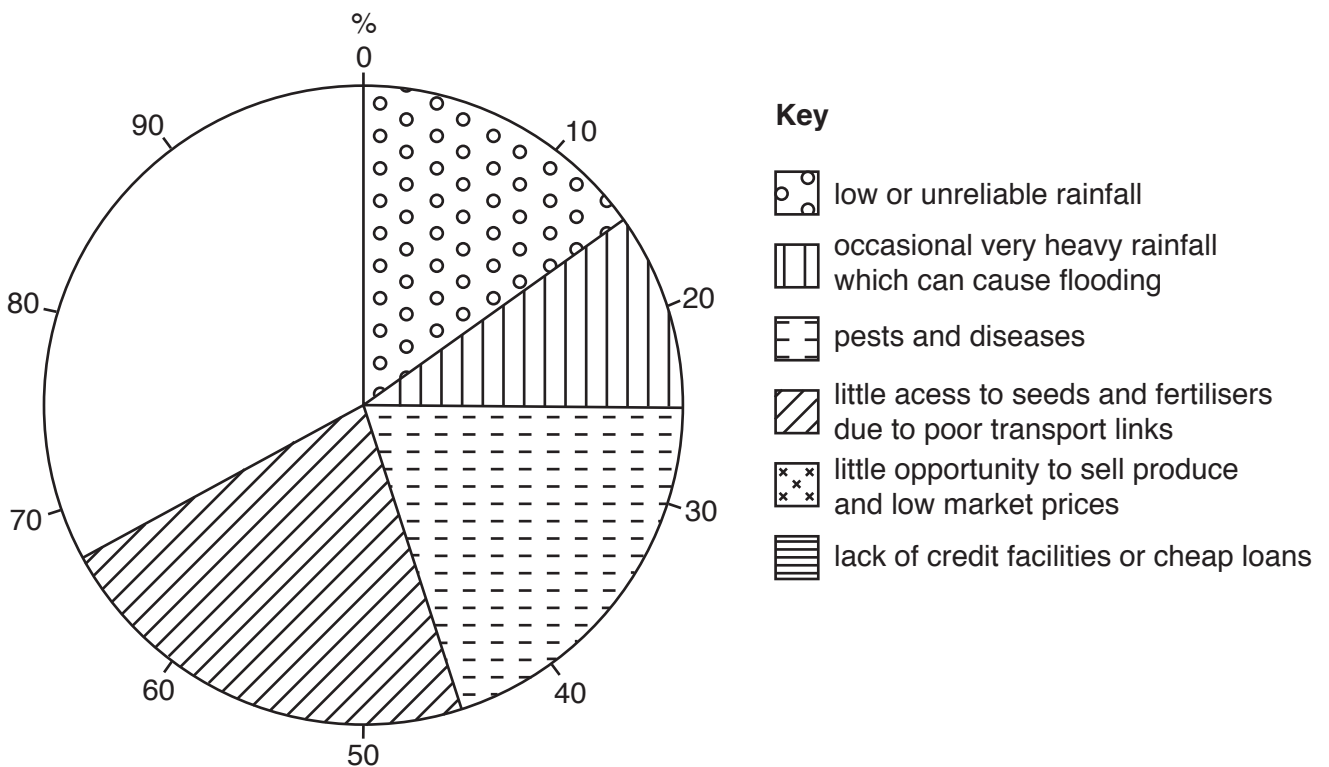
.....

..... [3]

(g) To get some information to test **Hypothesis 2**: *The main difficulties for farmers in the two areas are environmental*, the students asked Question 5 in the questionnaire. The results of this question are shown in Table 7.2 (Insert).

(i) Use the results to complete the pie graph in Fig. 7.5 below. [2]

**Farming difficulties**



**Fig. 7.5**

(ii) Do the results support **Hypothesis 2**: *The main difficulties for farmers in the two areas are environmental*? Support your decision with evidence from Fig. 7.5 and Table 7.2.

.....

.....

.....

.....

.....

.....

.....

.....

..... [4]

(h) Suggest how farmers in the village of Darajani could overcome the problem of water shortage caused by low or unreliable rainfall.

.....

.....

.....

.....

.....

.....

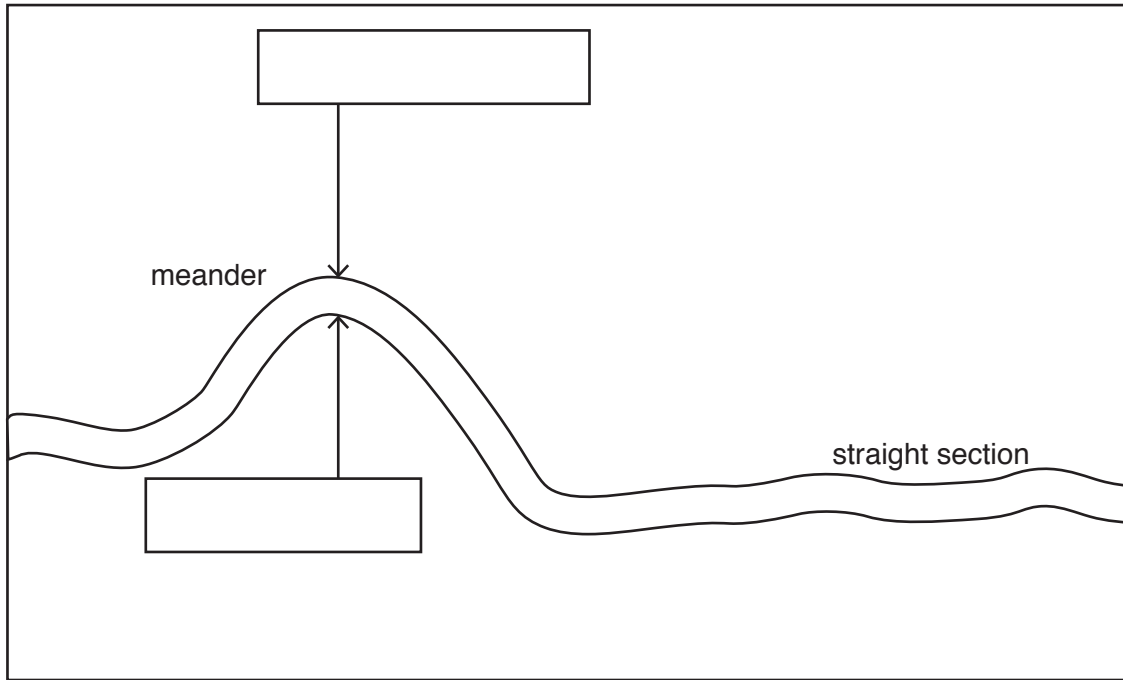
..... [3]

[Total: 30]

8 Students were planning fieldwork on a local river. They decided to investigate possible differences between a section where the river meandered and another section where the channel was straight.

(a) First they visited the river and identified two sections about 100 m apart which were suitable for their fieldwork. These are shown in Fig. 8.1 below.

**Sketch map of fieldwork area**



**Fig. 8.1**

(i) On Fig. 8.1 **write the words** EROSION and DEPOSITION in the two boxes to show where these processes occur. [1]

(ii) State the feature which may be formed if a meander is cut off from the river by erosion and deposition.

.....

[1]

The students investigated the following hypotheses:

**Hypothesis 1:** *The pattern of velocity (speed of flow) across the river is different in a meander and a straight section.*

**Hypothesis 2:** *Pebbles on the river bed (bedload) are larger where velocity is faster.*

(b) To investigate **Hypothesis 1** the students measured velocity using a flowmeter, as shown in Figs. 8.2 and 8.3 (Insert).

(i) Describe how the students used a flowmeter to measure velocity.

.....  
.....  
.....  
..... [2]

(ii) Give **one** advantage and **one** disadvantage of this method.

Advantage

.....  
.....

Disadvantage

.....  
..... [2]

(c) The students measured velocity every 0.5m across a river meander and straight section. Their results are shown in Table 8.1 (Insert).

(i) **Plot the result** at the point 2.5m from the bank on the straight section in Fig. 8.4 below. Use the key provided. [1]

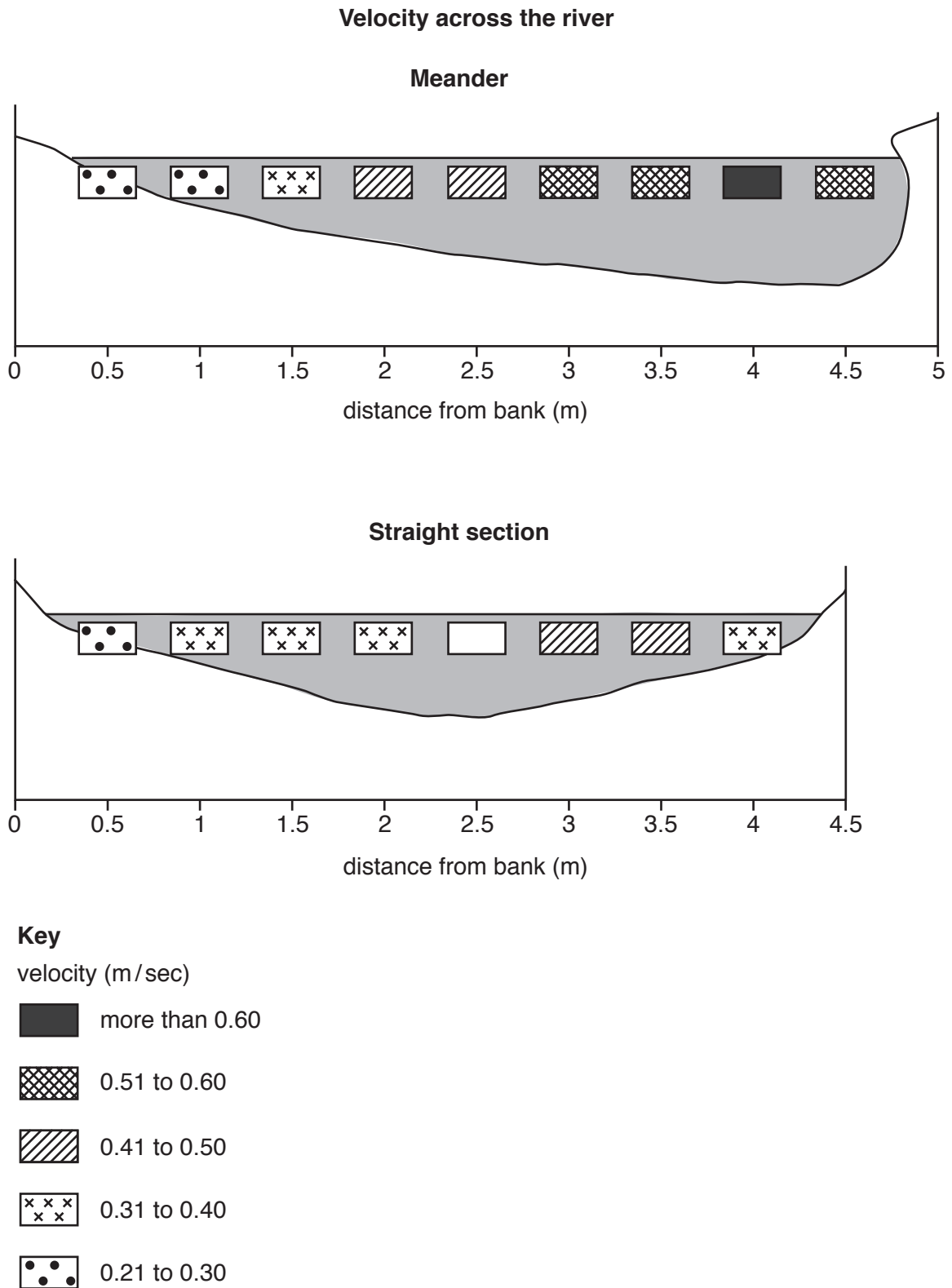


Fig. 8.4

- (ii) The students made the conclusion that **Hypothesis 1**: *The pattern of velocity (speed of flow) across the river is different in a meander and a straight section is correct. Support this conclusion with evidence from Fig. 8.4 and Table 8.1.*

.....

.....

.....

.....

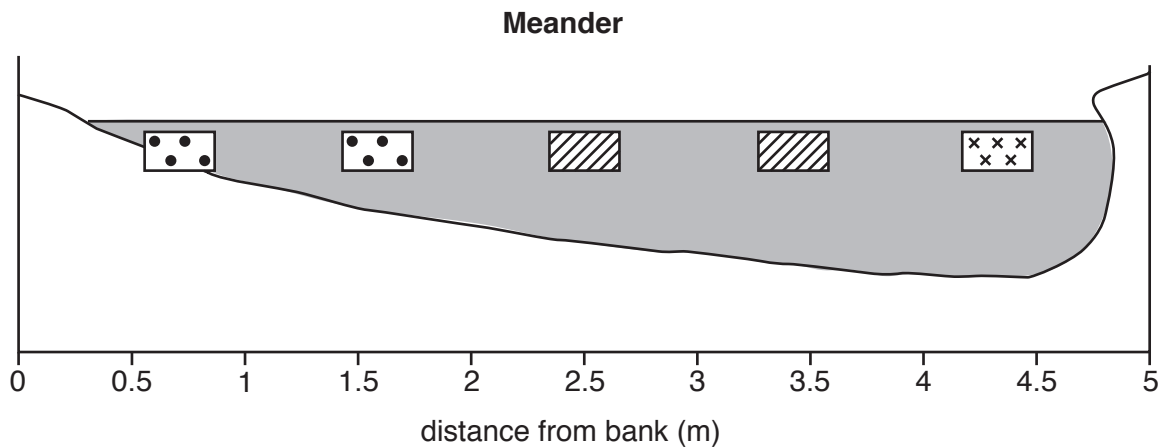
.....

..... [3]

- (iii) One student compared the group's results with some previous fieldwork results collected at the same meander. Students who had done the earlier fieldwork used a different method to calculate the average velocity. They measured the average time taken by floats to move 10m along the river.

The results of the previous fieldwork are shown in Fig. 8.5 below.

**Velocity measurements from previous fieldwork**



**Key**

velocity (m/sec)

- more than 0.60
- 0.51 to 0.60
- 0.41 to 0.50
- 0.31 to 0.40
- 0.21 to 0.30

**Fig. 8.5**

Identify **two** main differences between the results for the meander shown in Figs. 8.4 and 8.5.

1 .....

.....

2 .....

..... [2]

(iv) Suggest **two** reasons why the results from the two fieldwork investigations at the meander are different.

1 .....

.....

2 .....

..... [2]

(d) To investigate **Hypothesis 2: Pebbles on the river bed (bedload) are larger where velocity is faster**, the students measured the size of five pebbles every 0.5 m across the river channel on both the meander and straight section.

(i) Suggest a method the students could have used to measure each pebble.

.....

.....

.....

..... [2]

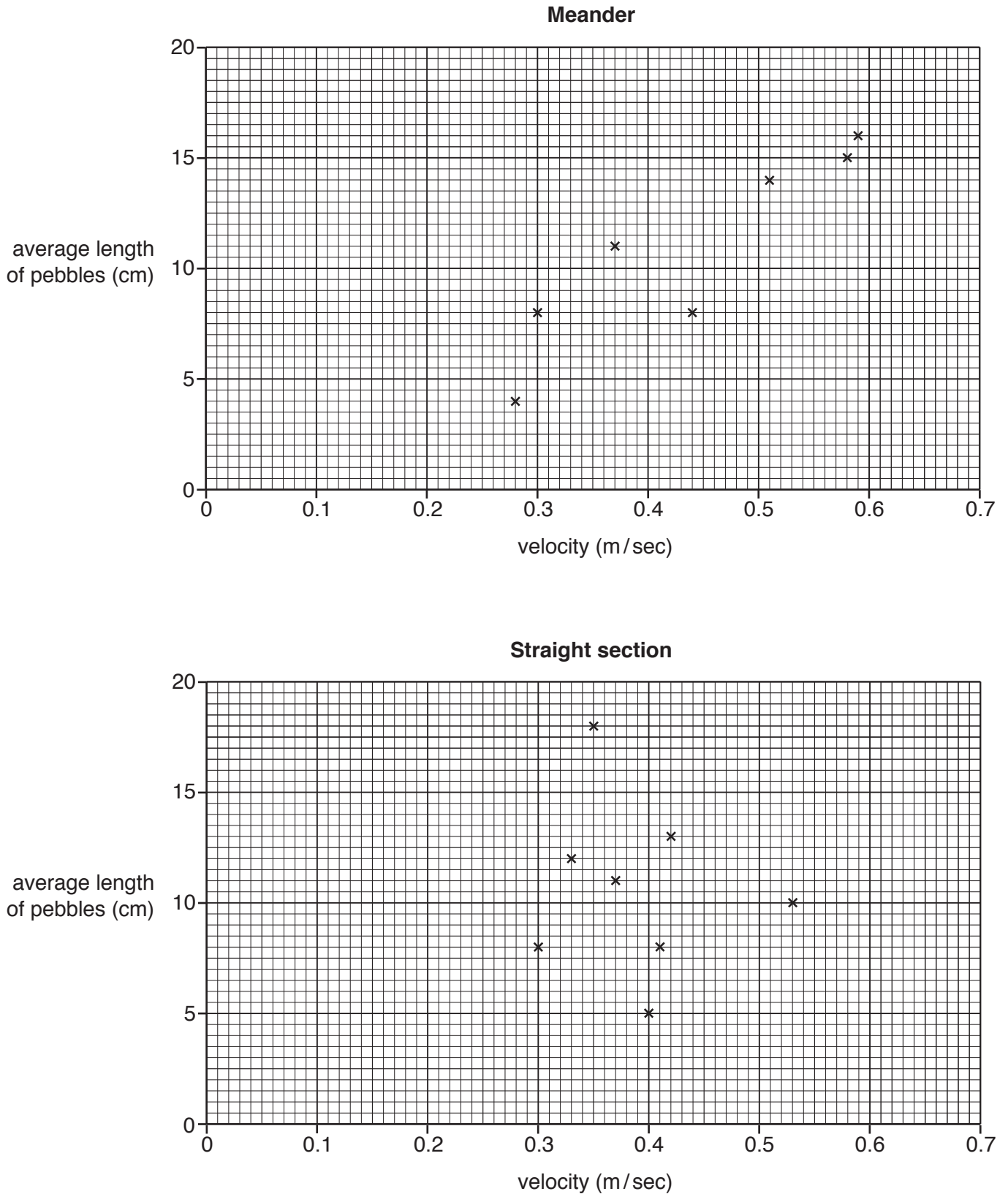
- (ii) The results of the students' measurements on both sections of the river are shown in Table 8.1 (Insert).

To see if there was a relationship between velocity and pebble size the students plotted the results on scatter graphs shown in Fig. 8.6 below.

**Plot the results** at 2.0m and 4.0m across the meander in Fig. 8.6.

[2]

### Relationship between velocity and length of pebbles



**Fig. 8.6**

2217/22/O/N/18



- (iii) Do the results shown in Fig. 8.6 and Table 8.1 support **Hypothesis 2: Pebbles on the river bed (bedload) are larger where velocity is faster?** Use data to support your answer. Refer to both the meander and the straight section.

Meander

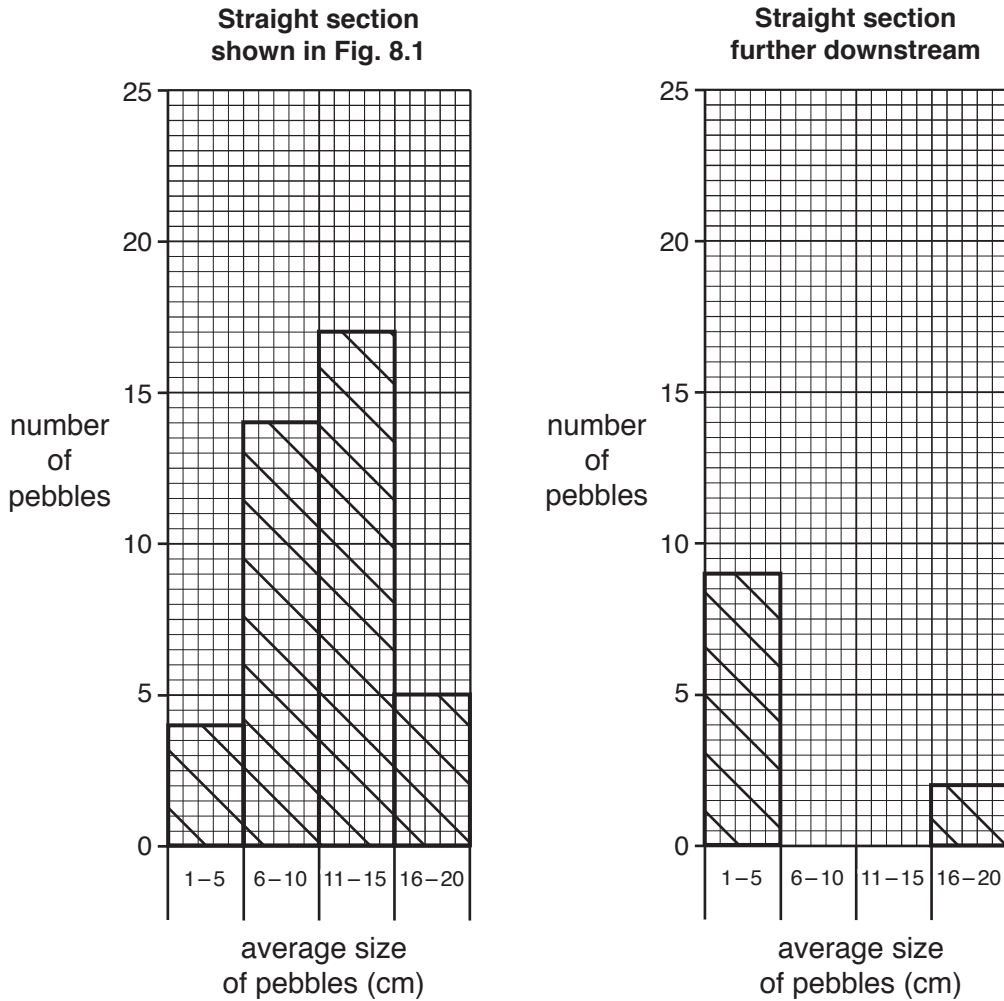
.....  
.....  
.....  
.....

Straight section

.....  
.....  
.....  
..... [4]

- (e) Having completed their fieldwork the students looked at the Bradshaw model, which states that bedload becomes smaller downstream. To test this model they measured the size of five pebbles every 0.5m across the river channel at another straight section of the river downstream. The results of the measurements at both sections are shown in Table 8.2 (Insert).
- (i) The students plotted their results on histograms shown in Fig. 8.7 below. Use the results in Table 8.2 to **complete the histogram** for the section further downstream in Fig. 8.7. [2]

**Results of pebble measurements**



**Fig. 8.7**

- (ii) Describe **two** pieces of evidence from Table 8.2 and Fig. 8.7 which show that bedload becomes smaller downstream.

1 .....

.....

2 .....

..... [2]

(iii) Explain why bedload becomes smaller downstream.

.....

.....

.....

..... [2]

(f) Identify the **two** statements below which describe how river characteristics change downstream. Tick (✓) your choices. [2]

	Tick (✓)
average velocity decreases downstream	
channel depth increases downstream	
channel width decreases downstream	
discharge increases downstream	
gradient increases downstream	

[Total: 30]









**BLANK PAGE**

---

Permission to reproduce items where third-party owned material protected by copyright is included has been sought and cleared where possible. Every reasonable effort has been made by the publisher (UCLES) to trace copyright holders, but if any items requiring clearance have unwittingly been included, the publisher will be pleased to make amends at the earliest possible opportunity.

To avoid the issue of disclosure of answer-related information to candidates, all copyright acknowledgements are reproduced online in the Cambridge International Examinations Copyright Acknowledgements Booklet. This is produced for each series of examinations and is freely available to download at [www.cie.org.uk](http://www.cie.org.uk) after the live examination series.

Cambridge International Examinations is part of the Cambridge Assessment Group. Cambridge Assessment is the brand name of University of Cambridge Local Examinations Syndicate (UCLES), which is itself a department of the University of Cambridge.